

APPENDIX A

Real Numbers, Intervals, and Inequalities

EXERCISE SET A

1. (a) rational (b) integer, rational (c) integer, rational
 (d) rational (e) integer, rational (f) irrational
 (g) rational (h) 467 integer, rational
2. (a) irrational (b) rational (c) rational (d) rational
3. (a) $x = 0.123123123\dots$, $1000x = 123 + x$, $x = 123/999 = 41/333$
 (b) $x = 12.7777\dots$, $10(x - 12) = 7 + (x - 12)$, $9x = 115$, $x = 115/9$
 (c) $x = 38.07818181\dots$, $100x = 3807.81818181\dots$, $99x = 100x - x = 3769.74$,

$$x = \frac{3769.74}{99} = \frac{376974}{9900} = \frac{20943}{550}$$

 (d) $\frac{4296}{10000} = \frac{537}{1250}$
4. $x = 0.99999\dots$, $10x = 9 + x$, $9x = 9$, $x = 1$
5. (a) If r is the radius, then $D = 2r$ so $\left(\frac{8}{9}D\right)^2 = \left(\frac{16}{9}r\right)^2 = \frac{256}{81}r^2$. The area of a circle of radius r is πr^2 so $256/81$ was the approximation used for π .
 (b) $22/7 \approx 3.1429$ is better than $256/81 \approx 3.1605$.
6. (a) $\frac{223}{71} < \frac{333}{106} < \frac{63}{25} \left(\frac{17 + 15\sqrt{5}}{7 + 15\sqrt{5}} \right) < \frac{355}{113} < \frac{22}{7}$
 (b) Ramanujan's (c) Athonisoon's (d) Ramanujan's
7.

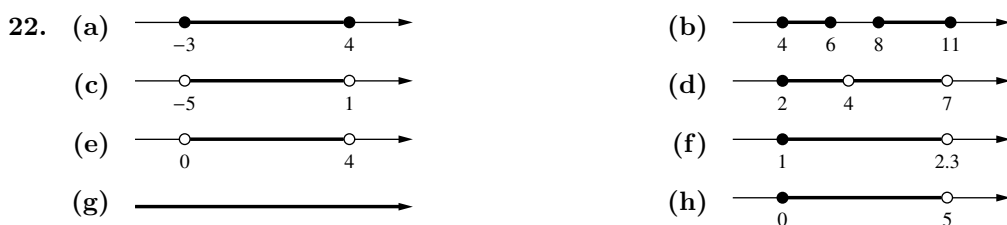
Line	2	3	4	5	6	7
Blocks	3, 4	1, 2	3, 4	2, 4, 5	1, 2	3, 4
8.

Line	1	2	3	4	5
Blocks	all blocks	none	2, 4	2	2, 3
9. (a) always correct (add -3 to both sides of $a \leq b$)
 (b) not always correct (correct only if $a = b$)
 (c) not always correct (correct only if $a = b$)
 (d) always correct (multiply both sides of $a \leq b$ by 6)
 (e) not always correct (correct only if $a \geq 0$ or $a = b$)
 (f) always correct (multiply both sides of $a \leq b$ by the nonnegative quantity a^2)
10. (a) always correct
 (b) not always correct (for example let $a = b = 0$, $c = 1$, $d = 2$)
 (c) not always correct (for example let $a = 1$, $b = 2$, $c = d = 0$)
11. (a) all values because $a = a$ is always valid (b) none
12. $a = b$, because if $a \neq b$ then $a < b$ and $b < a$ are contradictory


13. (a) yes, because $a \leq b$ means $a < b$ or $a = b$, thus $a < b$ certainly means $a \leq b$
 (b) no, because $a < b$ is false if $a = b$ is true
14. (a) $x^2 - 5x = 0$, $x(x - 5) = 0$ so $x = 0$ or $x = 5$
 (b) $-1, 0, 1, 2$ are the only integers that satisfy $-2 < x < 3$
15. (a) $\{x : x \text{ is a positive odd integer}\}$ (b) $\{x : x \text{ is an even integer}\}$
 (c) $\{x : x \text{ is irrational}\}$ (d) $\{x : x \text{ is an integer and } 7 \leq x \leq 10\}$
16. (a) not equal to A because 0 is not in A (b) equal to A
 (c) equal to A because $(x - 3)(x^2 - 3x + 2) = 0$, $(x - 3)(x - 2)(x - 1) = 0$ so $x = 1, 2$, or 3
17. (a) false, there are points inside the triangle that are not inside the circle
 (b) true, all points inside the triangle are also inside the square
 (c) true (d) false (e) true
 (f) true, a is inside the circle (g) true
18. (a) $\emptyset, \{a_1\}, \{a_2\}, \{a_3\}, \{a_1, a_2\}, \{a_1, a_3\}, \{a_2, a_3\}, \{a_1, a_2, a_3\}$ (b) \emptyset




21. (a) $[-2, 2]$ (b) $(-\infty, -2) \cup (2, +\infty)$




23. $3x < 10; (-\infty, 10/3)$




24. $\frac{1}{5}x \geq 8; [40, +\infty)$




25. $2x \leq -11; (-\infty, -11/2]$




26. $9x < -10; (-\infty, -10/9)$




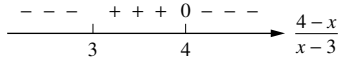
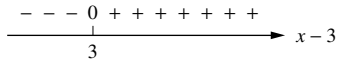
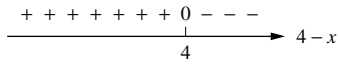
27. $2x \leq 1$ and $2x > -3; (-3/2, 1/2]$



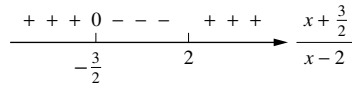
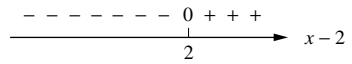
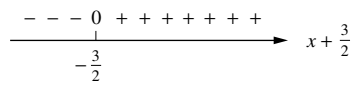
28. $8x \geq 5$ and $8x \leq 14; [5/8, 7/4]$




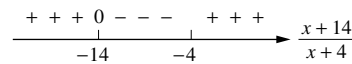
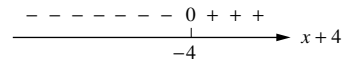
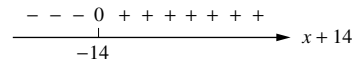
29. $\frac{x}{x-3} - 4 < 0, \frac{12-3x}{x-3} < 0, \frac{4-x}{x-3} < 0;$
 $(-\infty, 3) \cup (4, +\infty)$




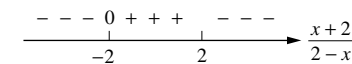
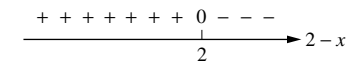
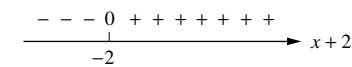
31. $\frac{3x+1}{x-2} - 1 = \frac{2x+3}{x-2} < 0, \frac{x+3/2}{x-2} < 0;$
 $(-\frac{3}{2}, 2)$




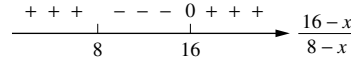
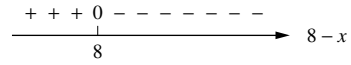
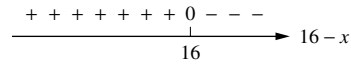
32. $\frac{x/2-3}{4+x} - 1 > 0, \frac{x-6}{4+x} - 2 > 0, \frac{x+14}{x+4} < 0;$
 $(-14, -4)$



33. $\frac{4}{2-x} - 1 = \frac{x+2}{2-x} \leq 0; (-\infty, -2] \cup (2, +\infty)$

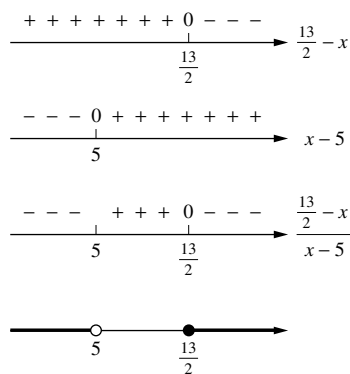


30. $\frac{x}{8-x} + 2 = \frac{16-x}{8-x} \geq 0;$
 $(-\infty, 8) \cup [16, +\infty)$




$$34. \frac{3}{x-5} - 2 = \frac{13-2x}{x-5} \leq 0, \frac{13/2-x}{x-5} \leq 0;$$

$$(-\infty, 5) \cup [\frac{13}{2}, +\infty)$$

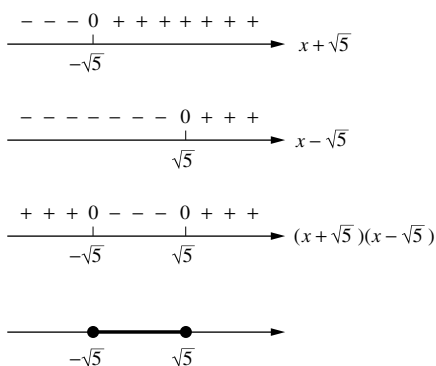


$$35. x^2 - 9 = (x+3)(x-3) > 0;$$


$$(-\infty, -3) \cup (3, +\infty)$$




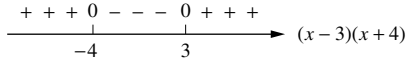
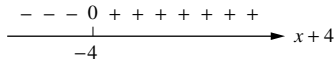
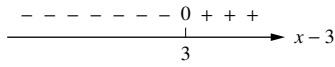
$$36. x^2 - 5 = (x - \sqrt{5})(x + \sqrt{5}) \leq 0; [-\sqrt{5}, \sqrt{5}]$$




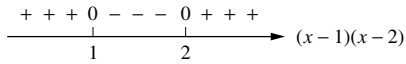
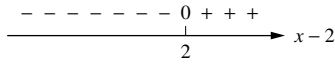
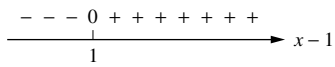
$$37. (x-4)(x+2) > 0; (-\infty, -2) \cup (4, +\infty)$$



38. $(x-3)(x+4) < 0; (-4, 3)$


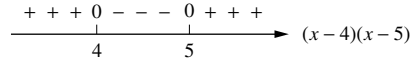
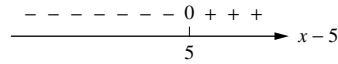
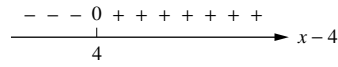


40. $(x-2)(x-1) \geq 0;$
 $(-\infty, 1] \cup [2, +\infty)$

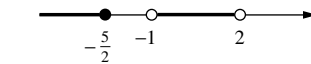
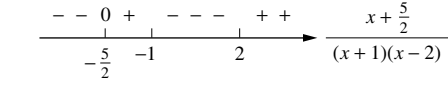
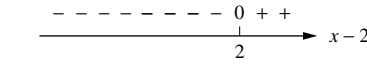
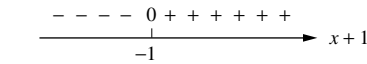
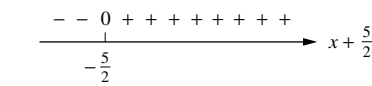
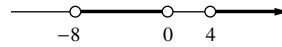
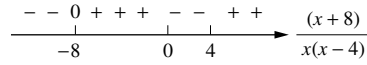
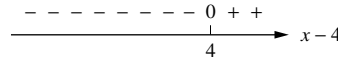
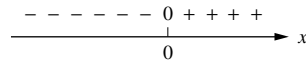
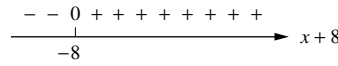


42. $\frac{1}{x+1} - \frac{3}{x-2} = \frac{-2x-5}{(x+1)(x-2)} \geq 0,$
 $\frac{x+5/2}{(x+1)(x-2)} \leq 0;$
 $(-\infty, -\frac{5}{2}] \cup (-1, 2)$

39. $(x-4)(x-5) \leq 0; [4, 5]$



41. $\frac{3}{x-4} - \frac{2}{x} = \frac{x+8}{x(x-4)} > 0;$
 $(-8, 0) \cup (4, +\infty)$



43. By trial-and-error we find that $x = 2$ is a root of the equation $x^3 - x^2 - x - 2 = 0$ so $x - 2$ is a factor of $x^3 - x^2 - x - 2$. By long division we find that $x^2 + x + 1$ is another factor so $x^3 - x^2 - x - 2 = (x-2)(x^2 + x + 1)$. The linear factors of $x^2 + x + 1$ can be determined by first finding the roots of $x^2 + x + 1 = 0$ by the quadratic formula. These roots are complex numbers

- so $x^2 + x + 1 \neq 0$ for all real x ; thus $x^2 + x + 1$ must be always positive or always negative. Since $x^2 + x + 1$ is positive when $x = 0$, it follows that $x^2 + x + 1 > 0$ for all real x . Hence $x^3 - x^2 - x - 2 > 0$, $(x - 2)(x^2 + x + 1) > 0$, $x - 2 > 0$, $x > 2$, so $S = (2, +\infty)$.
44. By trial-and-error we find that $x = 1$ is a root of the equation $x^3 - 3x + 2 = 0$ so $x - 1$ is a factor of $x^3 - 3x + 2$. By long division we find that $x^2 + x - 2$ is another factor so $x^3 - 3x + 2 = (x - 1)(x^2 + x - 2) = (x - 1)(x - 1)(x + 2) = (x - 1)^2(x + 2)$. Therefore we want to solve $(x - 1)^2(x + 2) \leq 0$. Now if $x \neq 1$, then $(x - 1)^2 > 0$ and so $x + 2 \leq 0$, $x \leq -2$. By inspection, $x = 1$ is also a solution so $S = (-\infty, -2] \cup \{1\}$.
45. $\sqrt{x^2 + x - 6}$ is real if $x^2 + x - 6 \geq 0$. Factor to get $(x + 3)(x - 2) \geq 0$ which has as its solution $x \leq -3$ or $x \geq 2$.
46. $\frac{x+2}{x-1} \geq 0$; $(-\infty, -2] \cup (1, +\infty)$
47. $25 \leq \frac{5}{9}(F - 32) \leq 40$, $45 \leq F - 32 \leq 72$, $77 \leq F \leq 104$
48. (a) $n = 2k$, $n^2 = 4k^2 = 2(2k^2)$ where $2k^2$ is an integer.
 (b) $n = 2k + 1$, $n^2 = 4k^2 + 4k + 1 = 2(2k^2 + 2k) + 1$ where $2k^2 + 2k$ is an integer.
49. (a) Assume m and n are rational, then $m = \frac{p}{q}$ and $n = \frac{r}{s}$ where p, q, r , and s are integers so $m + n = \frac{p}{q} + \frac{r}{s} = \frac{ps + rq}{qs}$ which is rational because $ps + rq$ and qs are integers.
 (b) (proof by contradiction) Assume m is rational and n is irrational, then $m = \frac{p}{q}$ where p and q are integers. Suppose that $m + n$ is rational, then $m + n = \frac{r}{s}$ where r and s are integers so $n = \frac{r}{s} - m = \frac{r}{s} - \frac{p}{q} = \frac{rq - ps}{sq}$. But $rq - ps$ and sq are integers, so n is rational which contradicts the assumption that n is irrational.
50. (a) Assume m and n are rational, then $m = \frac{p}{q}$ and $n = \frac{r}{s}$ where p, q, r , and s are integers so $mn = \frac{p}{q} \cdot \frac{r}{s} = \frac{pr}{qs}$ which is rational because pr and qs are integers.
 (b) (proof by contradiction) Assume m is rational and nonzero and that n is irrational, then $m = \frac{p}{q}$ where p and q are integers and $p \neq 0$. Suppose that mn is rational, then $mn = \frac{r}{s}$ where r and s are integers so $n = \frac{r/s}{m} = \frac{r/s}{p/q} = \frac{rq}{ps}$. But rq and ps are integers, so n is rational which contradicts the assumption that n is irrational.
51. $a = \sqrt{2}, b = \sqrt{3}, c = \sqrt{6}, d = -\sqrt{2}$ are irrational, and $a + d = 0$, a rational; $a + a = 2\sqrt{2}$, an irrational; $ad = -2$, a rational; and $ab = c$, an irrational.
52. (a) irrational (Exercise 49(b)) (b) irrational (Exercise 50(b))
 (c) rational by inspection; Exercise 51 gives no information
 (d) $\sqrt{\pi}$ must be irrational, for if it were rational, then so would be $\pi = (\sqrt{\pi})^2$ by Exercise 50(a); but π is known to be irrational.
53. The average of a and b is $\frac{1}{2}(a + b)$; if a and b are rational then so is the average, by Exercise 49(a) and Exercise 50(a). On the other hand if $a = b = \sqrt{2}$ then the average of a and b is irrational, but the average of a and $-b$ is rational.

54. If $10^x = 3$, then $x > 0$ because $10^x \leq 1$ for $x \leq 0$. If $10^{p/q} = 3$ with p, q integers, then $10^p = 3^q$. Following Exercise 48, if $n = 2k$ is even, then n^2, n^3, n^4, \dots are even; and if $n = 2k + 1$ then n^2, n^3, n^4, \dots are odd. Since $10^p = 3^q$, the left side is even and the right side is odd, a contradiction.
55. $8x^3 - 4x^2 - 2x + 1$ can be factored by grouping terms:
 $(8x^3 - 4x^2) - (2x - 1) = 4x^2(2x - 1) - (2x - 1) = (2x - 1)(4x^2 - 1) = (2x - 1)^2(2x + 1)$. The problem, then, is to solve $(2x - 1)^2(2x + 1) < 0$. By inspection, $x = 1/2$ is not a solution. If $x \neq 1/2$, then $(2x - 1)^2 > 0$ and it follows that $2x + 1 < 0$, $2x < -1$, $x < -1/2$, so $S = (-\infty, -1/2)$.
56. Rewrite the inequality as $12x^3 - 20x^2 + 11x - 2 \geq 0$. If a polynomial in x with integer coefficients has a rational zero $\frac{p}{q}$, a fraction in lowest terms, then p must be a factor of the constant term and q must be a factor of the coefficient of the highest power of x . By trial-and-error we find that $x = 1/2$ is a zero, thus $(x - 1/2)$ is a factor so
- $$\begin{aligned} 12x^3 - 20x^2 + 11x - 2 &= (x - 1/2)(12x^2 - 14x + 4) \\ &= 2(x - 1/2)(6x^2 - 7x + 2) \\ &= 2(x - 1/2)(2x - 1)(3x - 2) = (2x - 1)^2(3x - 2). \end{aligned}$$
- Now to solve $(2x - 1)^2(3x - 2) \geq 0$ we first note that $x = 1/2$ is a solution. If $x \neq 1/2$ then $(2x - 1)^2 > 0$ and $3x - 2 \geq 0$, $3x \geq 2$, $x \geq 2/3$ so $S = [2/3, +\infty) \cup \{1/2\}$.
57. If $a < b$, then $ac < bc$ because c is positive; if $c < d$, then $bc < bd$ because b is positive, so $ac < bd$ (Theorem A.1(a)). (Note that the result is still true if one of a, b, c, d is allowed to be negative, that is $a < 0$ or $c < 0$.)
58. no, since the decimal representation is not repeating (the string of zeros does not have constant length)

APPENDIX B

Absolute Value

EXERCISE SET B

1. (a) 7 (b) $\sqrt{2}$ (c) k^2 (d) k^2
2. $\sqrt{(x-6)^2} = x-6$ if $x \geq 6$, $\sqrt{(x-6)^2} = -(x-6) = -x+6$ if $x < 6$
3. $|x-3| = |3-x| = 3-x$ if $3-x \geq 0$, which is true if $x \leq 3$
4. $|x+2| = x+2$ if $x+2 \geq 0$ so $x \geq -2$. 5. All real values of x because $x^2 + 9 > 0$.
6. $|x^2 + 5x| = x^2 + 5x$ if $x^2 + 5x \geq 0$ so $x(x+5) \geq 0$ which is true for $x \leq -5$ or $x \geq 0$.
7. $|3x^2 + 2x| = |x(3x+2)| = |x||3x+2|$. If $|x||3x+2| = x|3x+2|$, then $|x||3x+2| - x|3x+2| = 0$, $(|x|-x)|3x+2| = 0$, so either $|x|-x = 0$ or $|3x+2| = 0$. If $|x|-x = 0$, then $|x| = x$, which is true for $x \geq 0$. If $|3x+2| = 0$, then $x = -2/3$. The statement is true for $x \geq 0$ or $x = -2/3$.
8. $|6-2x| = |2(3-x)| = |2||3-x| = 2|x-3|$ for all real values of x .
9. $\sqrt{(x+5)^2} = |x+5| = x+5$ if $x+5 \geq 0$, which is true if $x \geq -5$.
10. $\sqrt{(3x-2)^2} = |3x-2| = |2-3x| = 2-3x$ if $2-3x \geq 0$ so $x \leq 2/3$.
13. (a) $|7-9| = |-2| = 2$ (b) $|3-2| = |1| = 1$
 (c) $|6-(-8)| = |14| = 14$ (d) $|-3-\sqrt{2}| = |-(3+\sqrt{2})| = 3+\sqrt{2}$
 (e) $|-4-(-11)| = |7| = 7$ (f) $|-5-0| = |-5| = 5$
14. $\sqrt{a^4} = \sqrt{(a^2)^2} = |a^2|$, but $|a^2| = a^2$ because $a^2 \geq 0$ so it is valid for all values of a .
15. (a) B is 6 units to the left of A ; $b = a - 6 = -3 - 6 = -9$.
 (b) B is 9 units to the right of A ; $b = a + 9 = -2 + 9 = 7$.
 (c) B is 7 units from A ; either $b = a + 7 = 5 + 7 = 12$ or $b = a - 7 = 5 - 7 = -2$. Since it is given that $b > 0$, it follows that $b = 12$.
16. In each case we solve for e in terms of f :
 (a) $e = f - 4$; e is to the left of f . (b) $e = f + 4$; e is to the right of f .
 (c) $e = f + 6$; e is to the right of f . (d) $e = f - 7$; e is to the left of f .
17. $|6x-2| = 7$
 Case 1: $6x-2=7$
 $6x=9$
 $x=3/2$
 Case 2: $6x-2=-7$
 $6x=-5$
 $x=-5/6$
18. $|3+2x| = 11$
 Case 1: $3+2x=11$
 $2x=8$
 $x=4$
 Case 2: $3+2x=-11$
 $2x=-14$
 $x=-7$
19. $|6x-7| = |3+2x|$
 Case 1: $6x-7=3+2x$
 $4x=10$
 $x=5/2$
 Case 2: $6x-7=-(3+2x)$
 $8x=4$
 $x=1/2$
20. $|4x+5| = |8x-3|$
 Case 1: $4x+5=8x-3$
 $-4x=-8$
 $x=2$
 Case 2: $4x+5=-(8x-3)$
 $12x=-2$
 $x=-1/6$

21. $|9x| - 11 = x$

Case 1:

$$9x - 11 = x$$

$$8x = 11$$

$$x = 11/8$$

Case 2:

$$-9x - 11 = x$$

$$-10x = 11$$

$$x = -11/10$$

23. $\left| \frac{x+5}{2-x} \right| = 6$

Case 1:

$$\frac{x+5}{2-x} = 6$$

$$x+5 = 12-6x$$

$$7x = 7$$

$$x = 1$$

Case 2:

$$\frac{x+5}{2-x} = -6$$

$$x+5 = -12+6x$$

$$-5x = -17$$

$$x = 17/5$$

25. $|x+6| < 3$

$$-3 < x+6 < 3$$

$$-9 < x < -3$$

$$S = (-9, -3)$$

27. $|2x-3| \leq 6$

$$-6 \leq 2x-3 \leq 6$$

$$-3 \leq 2x \leq 9$$

$$-3/2 \leq x \leq 9/2$$

$$S = [-3/2, 9/2]$$

29. $|x+2| > 1$

Case 1:

$$x+2 > 1$$

$$x > -1$$

$$S = (-\infty, -3) \cup (-1, +\infty)$$

Case 2:

$$x+2 < -1$$

$$x < -3$$

22. $2x-7 = |x+1|$

Case 1:

$$2x-7 = x+1$$

$$x = 8$$

Case 2:

$$2x-7 = -(x+1)$$

$$3x = 6$$

$$x = 2; \text{ not a solution}$$

because x must also

satisfy $x < -1$

24. $\left| \frac{x-3}{x+4} \right| = 5$

Case 1:

$$\frac{x-3}{x+4} = 5$$

$$x-3 = 5x+20$$

$$-4x = 23$$

$$x = -23/4$$

Case 2:

$$\frac{x-3}{x+4} = -5$$

$$x-3 = -5x-20$$

$$6x = -17$$

$$x = -17/6$$

26. $|7-x| \leq 5$

$$-5 \leq 7-x \leq 5$$

$$-12 \leq -x \leq -2$$

$$12 \geq x \geq 2$$

$$S = [2, 12]$$

28. $|3x+1| < 4$

$$-4 < 3x+1 < 4$$

$$-5 < 3x < 3$$

$$-5/3 < x < 1$$

$$S = (-5/3, 1)$$

30. $\left| \frac{1}{2}x - 1 \right| \geq 2$

Case 1:

$$\frac{1}{2}x - 1 \geq 2$$

$$\frac{1}{2}x \geq 3$$

$$x \geq 6$$

Case 2:

$$\frac{1}{2}x - 1 \leq -2$$

$$\frac{1}{2}x \leq -1$$

$$x \leq -2$$

$$S = (-\infty, -2] \cup [6, +\infty)$$

31. $|5-2x| \geq 4$

Case 1:

$$5-2x \geq 4$$

$$-2x \geq -1$$

$$x \leq 1/2$$

Case 2:

$$5-2x \leq -4$$

$$-2x \leq -9$$

$$x \geq 9/2$$

$$S = (-\infty, 1/2] \cup [9/2, +\infty)$$

32. $|7x+1| > 3$

Case 1:

$$7x+1 > 3$$

$$7x > 2$$

$$x > 2/7$$

Case 2:

$$7x+1 < -3$$

$$7x < -4$$

$$x < -4/7$$

$$S = (-\infty, -4/7) \cup (2/7, +\infty)$$

$$33. \quad \frac{1}{|x-1|} < 2, x \neq 1$$

$$|x-1| > 1/2$$

Case 1: Case 2:

$$x-1 > 1/2 \quad x-1 < -1/2$$

$$x > 3/2 \quad x < 1/2$$

$$S = (-\infty, 1/2) \cup (3/2, +\infty)$$

$$34. \quad \frac{1}{|3x+1|} \geq 5, x \neq -1/3$$

$$|3x+1| \leq 1/5$$

$$-1/5 \leq 3x+1 \leq 1/5$$

$$-6/5 \leq 3x \leq -4/5$$

$$-2/5 \leq x \leq -4/15$$

$$S = [-2/5, -1/3) \cup (-1/3, -4/15]$$

$$35. \quad \frac{3}{|2x-1|} \geq 4, x \neq 1/2$$

$$\frac{|2x-1|}{3} \leq \frac{1}{4}$$

$$|2x-1| \leq 3/4$$

$$-3/4 \leq 2x-1 \leq 3/4$$

$$1/4 \leq 2x \leq 7/4$$

$$1/8 \leq x \leq 7/8$$

$$S = [1/8, 1/2) \cup (1/2, 7/8]$$

$$36. \quad \frac{2}{|x+3|} < 1, x \neq -3$$

$$\frac{|x+3|}{2} > 1$$

$$|x+3| > 2$$

Case 1: Case 2:

$$x+3 > 2 \quad x+3 < -2$$

$$x > -1 \quad x < -5$$

$$S = (-\infty, -5) \cup (-1, +\infty)$$

$$37. \quad \sqrt{(x^2-5x+6)^2} = x^2-5x+6 \text{ if } x^2-5x+6 \geq 0 \text{ or, equivalently, if } (x-2)(x-3) \geq 0;$$

$$x \in (-\infty, 2] \cup [3, +\infty).$$

$$38. \quad \text{If } x \geq 2 \text{ then } 3 \leq x-2 \leq 7 \text{ so } 5 \leq x \leq 9; \text{ if } x < 2 \text{ then } 3 \leq 2-x \leq 7 \text{ so } -5 \leq x \leq -1.$$

$$S = [-5, -1] \cup [5, 9].$$

$$39. \quad \text{If } u = |x-3| \text{ then } u^2-4u=12, u^2-4u-12=0, (u-6)(u+2)=0, \text{ so } u=6 \text{ or } u=-2. \text{ If } u=6 \text{ then } |x-3|=6, \text{ so } x=9 \text{ or } x=-3. \text{ If } u=-2 \text{ then } |x-3|=-2 \text{ which is impossible. The solutions are } -3 \text{ and } 9.$$

$$41. \quad |a-b| = |a+(-b)|$$

$$\leq |a| + |-b| \text{ (triangle inequality)}$$

$$= |a| + |b|.$$

$$42. \quad a = (a-b) + b$$

$$|a| = |(a-b) + b|$$

$$|a| \leq |a-b| + |b| \text{ (triangle inequality)}$$

$$|a| - |b| \leq |a-b|.$$

$$43. \quad \text{From Exercise 42}$$

$$(i) \quad |a|-|b| \leq |a-b|; \text{ but } |b|-|a| \leq |b-a| = |a-b|, \text{ so (ii) } |a|-|b| \geq -|a-b|.$$

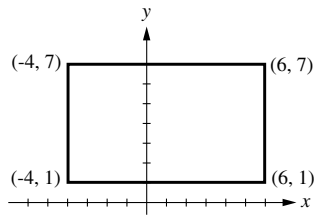
$$\text{Combining (i) and (ii): } -|a-b| \leq |a|-|b| \leq |a-b|, \text{ so } ||a|-|b|| \leq |a-b|.$$

APPENDIX C

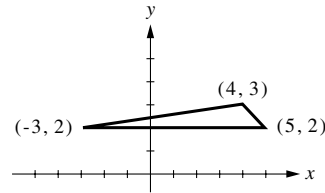
Coordinate Planes and Lines

EXERCISE SET C

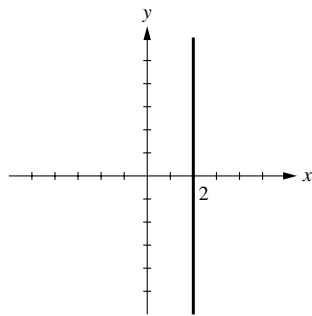
1.



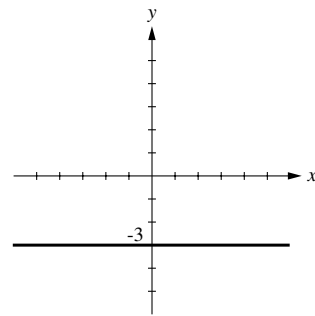
2. $\text{area} = \frac{1}{2}bh = \frac{1}{2}(5 - (-3))(1) = 4$



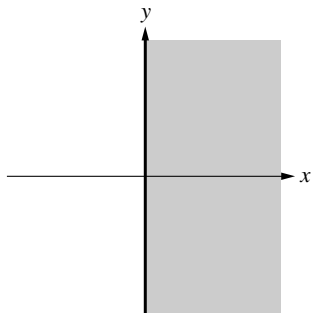
3. (a) $x = 2$



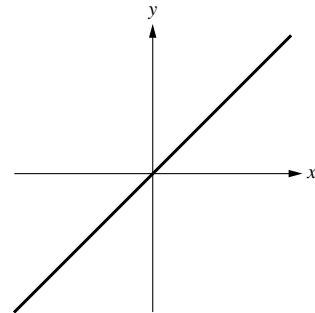
(b) $y = -3$



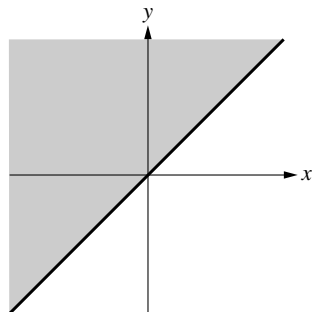
(c) $x \geq 0$



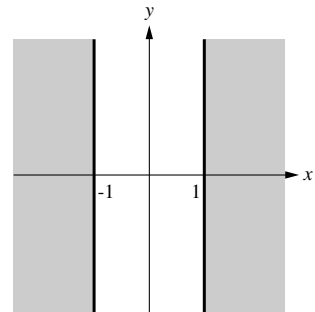
(d) $y = x$



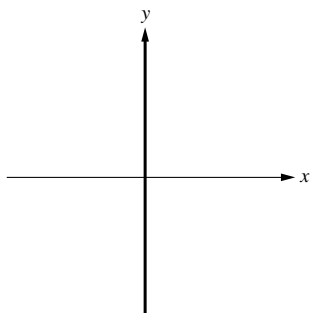
(e) $y \geq x$



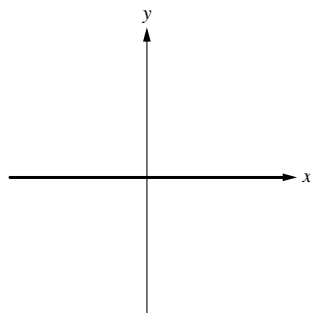
(f) $|x| \geq 1$



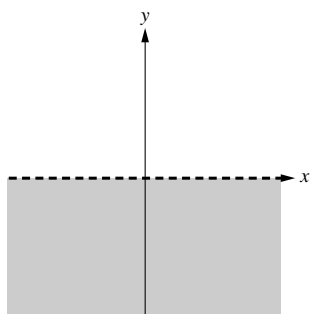
4. (a) $x = 0$



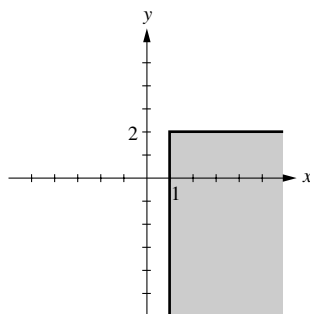
(b) $y = 0$



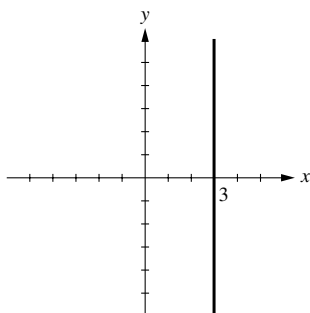
(c) $y < 0$



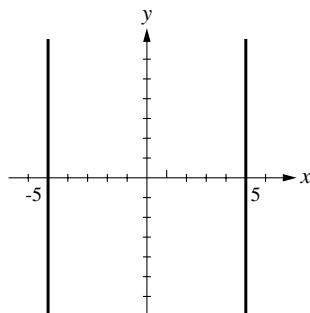
(d) $x \geq 1$ and $y \leq 2$



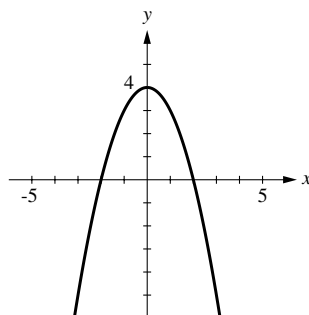
(e) $x = 3$



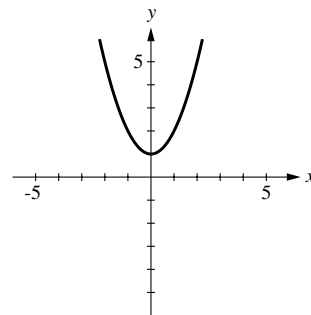
(f) $|x| = 5$



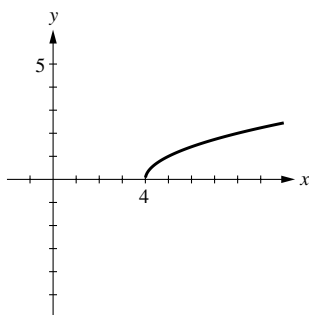
5. $y = 4 - x^2$



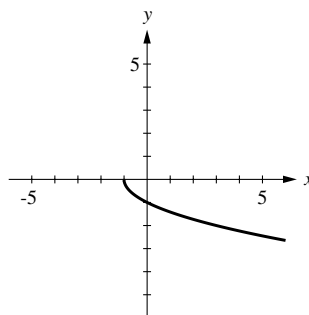
6. $y = 1 + x^2$



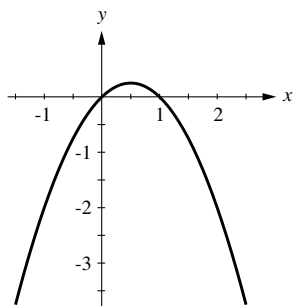
7. $y = \sqrt{x-4}$



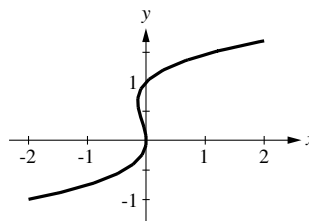
8. $y = -\sqrt{x+1}$



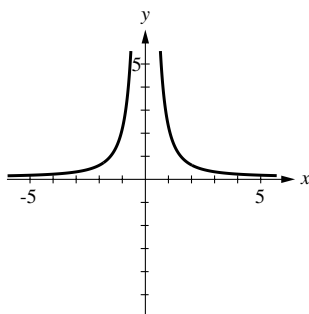
9. $x^2 - x + y = 0$



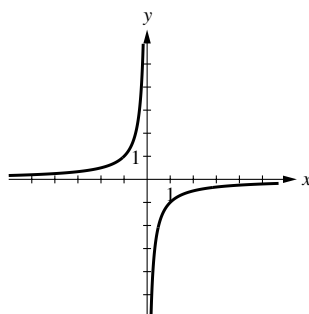
10. $x = y^3 - y^2$



11. $x^2y = 2$



12. $xy = -1$



13. (a) $m = \frac{4-2}{3-(-1)} = \frac{1}{2}$

(c) $m = \frac{\sqrt{2}-\sqrt{2}}{-3-4} = 0$

(b) $m = \frac{1-3}{7-5} = -1$

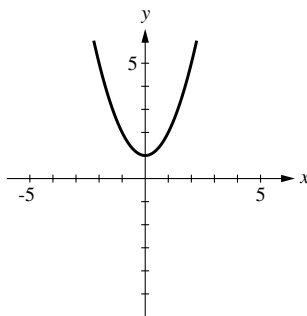
(d) $m = \frac{12-(-6)}{-2-(-2)} = \frac{18}{0}$, not defined

14. $m_1 = \frac{5-2}{6-(-1)} = \frac{3}{7}$, $m_2 = \frac{7-2}{2-(-1)} = \frac{5}{3}$, $m_3 = \frac{7-5}{2-6} = -\frac{1}{2}$

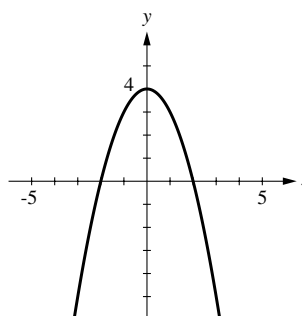
15. (a) The line through (1, 1) and (-2, -5) has slope $m_1 = \frac{-5-1}{-2-1} = 2$, the line through (1, 1) and (0, -1) has slope $m_2 = \frac{-1-1}{0-1} = 2$. The given points lie on a line because $m_1 = m_2$.

(b) The line through (-2, 4) and (0, 2) has slope $m_1 = \frac{2-4}{0+2} = -1$, the line through (-2, 4) and (1, 5) has slope $m_2 = \frac{5-4}{1+2} = \frac{1}{3}$. The given points do not lie on a line because $m_1 \neq m_2$.

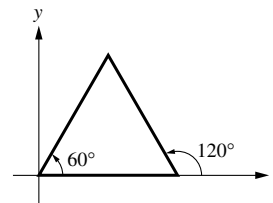
16.



17.



18. The triangle is equiangular because it is equilateral. The angles of inclination of the sides are 0° , 60° , and 120° (see figure), thus the slopes of its sides are $\tan 0^\circ = 0$, $\tan 60^\circ = \sqrt{3}$, and $\tan 120^\circ = -\sqrt{3}$.

19. $\text{III} < \text{II} < \text{IV} < \text{I}$ 20. $\text{III} < \text{IV} < \text{I} < \text{II}$

21. Use the points $(1, 2)$ and (x, y) to calculate the slope: $(y - 2)/(x - 1) = 3$

(a) if $x = 5$, then $(y - 2)/(5 - 1) = 3$, $y - 2 = 12$, $y = 14$

(b) if $y = -2$, then $(-2 - 2)/(x - 1) = 3$, $x - 1 = -4/3$, $x = -1/3$

22. Use $(7, 5)$ and (x, y) to calculate the slope: $(y - 5)/(x - 7) = -2$

(a) if $x = 9$, then $(y - 5)/(9 - 7) = -2$, $y - 5 = -4$, $y = 1$

(b) if $y = 12$, then $(12 - 5)/(x - 7) = -2$, $x - 7 = -7/2$, $x = 7/2$

23. Using $(3, k)$ and $(-2, 4)$ to calculate the slope, we find $\frac{k - 4}{3 - (-2)} = 5$, $k - 4 = 25$, $k = 29$.

24. The slope obtained by using the points $(1, 5)$ and $(k, 4)$ must be the same as that obtained from the points $(1, 5)$ and $(2, -3)$ so $\frac{4 - 5}{k - 1} = \frac{-3 - 5}{2 - 1}$, $-\frac{1}{k - 1} = -8$, $k - 1 = 1/8$, $k = 9/8$.

25. $\frac{0 - 2}{x - 1} = -\frac{0 - 5}{x - 4}$, $-2x + 8 = 5x - 5$, $7x = 13$, $x = 13/7$

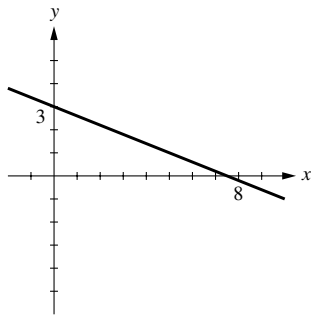
26. Use $(0, 0)$ and (x, y) to get $\frac{y - 0}{x - 0} = \frac{1}{2}$, $y = \frac{1}{2}x$. Use $(7, 5)$ and (x, y) to get $\frac{y - 5}{x - 7} = 2$,

$y - 5 = 2(x - 7)$, $y = 2x - 9$. Solve the system of equations $y = \frac{1}{2}x$ and $y = 2x - 9$ to get $x = 6$, $y = 3$.

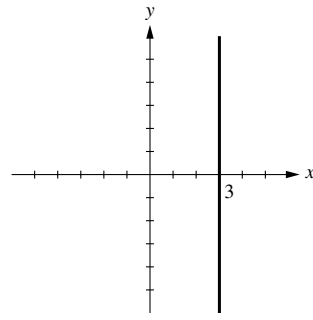
27. Show that opposite sides are parallel by showing that they have the same slope:
using $(3, -1)$ and $(6, 4)$, $m_1 = 5/3$; using $(6, 4)$ and $(-3, 2)$, $m_2 = 2/9$;
using $(-3, 2)$ and $(-6, -3)$, $m_3 = 5/3$; using $(-6, -3)$ and $(3, -1)$, $m_4 = 2/9$.
Opposite sides are parallel because $m_1 = m_3$ and $m_2 = m_4$.

28. The line through $(3, 1)$ and $(6, 3)$ has slope $m_1 = 2/3$, the line through $(3, 1)$ and $(2, 9)$ has slope $m_2 = -8$, the line through $(6, 3)$ and $(2, 9)$ has slope $m_3 = -3/2$. Because $m_1 m_3 = -1$, the corresponding lines are perpendicular so the given points are vertices of a right triangle.

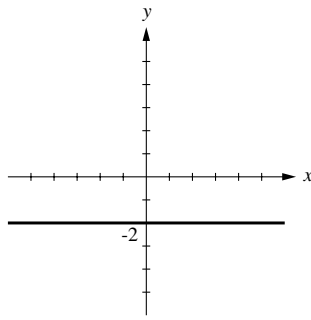
29. (a)



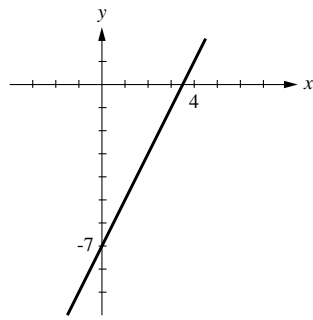
(b)



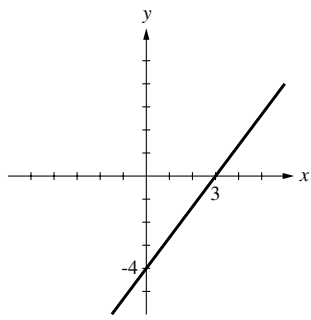
(c)



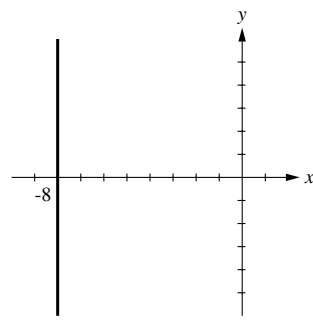
(d)



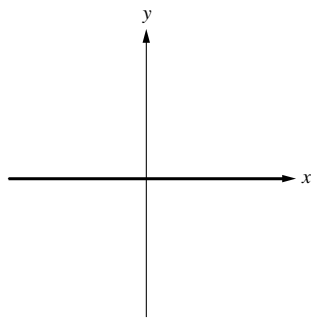
30. (a)



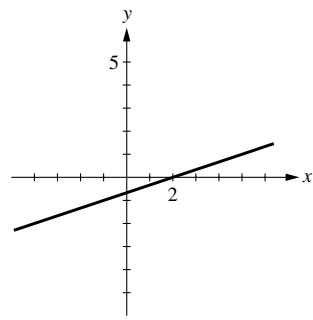
(b)



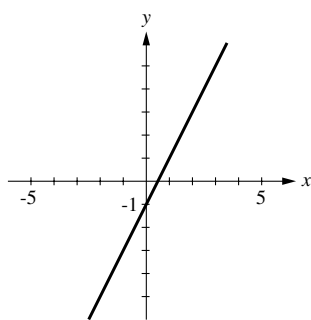
(c)



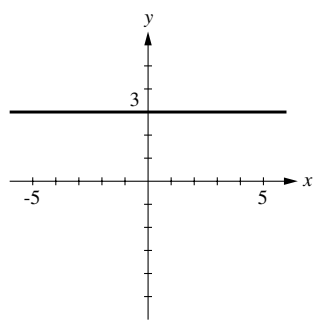
(d)

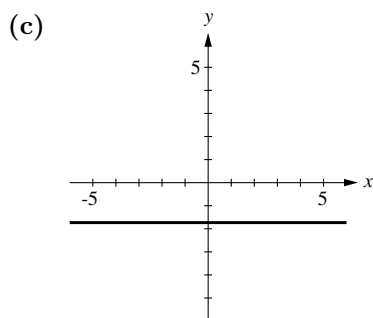
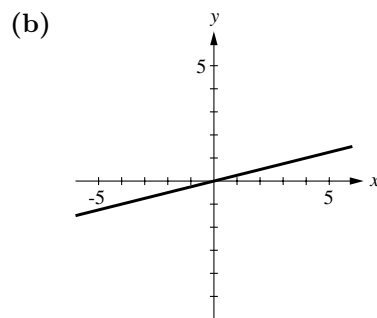
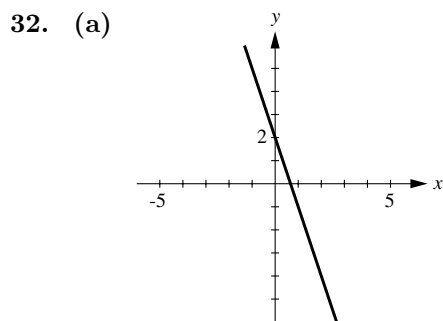
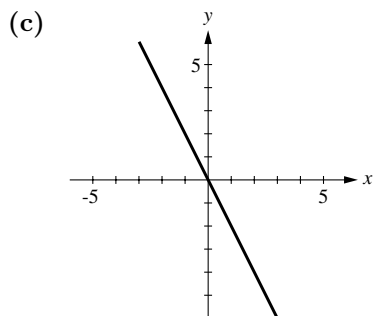


31. (a)



(b)





33. (a) $m = 3, b = 2$

(b) $m = -\frac{1}{4}, b = 3$

(c) $y = -\frac{3}{5}x + \frac{8}{5}$ so $m = -\frac{3}{5}, b = \frac{8}{5}$

(d) $m = 0, b = 1$

(e) $y = -\frac{b}{a}x + b$ so $m = -\frac{b}{a}$, y-intercept b

34. (a) $m = -4, b = 2$

(b) $y = \frac{1}{3}x - \frac{2}{3}$ so $m = \frac{1}{3}, b = -\frac{2}{3}$

(c) $y = -\frac{3}{2}x + 3$ so $m = -\frac{3}{2}, b = 3$

(d) $y = 3$ so $m = 0, b = 3$

(e) $y = -\frac{a_0}{a_1}x$ so $m = -\frac{a_0}{a_1}, b = 0$

35. (a) $m = (0 - (-3))/(2 - 0) = 3/2$ so $y = 3x/2 - 3$

(b) $m = (-3 - 0)/(4 - 0) = -3/4$ so $y = -3x/4$

36. (a) $m = (0 - 2)/(2 - 0) = -1$ so $y = -x + 2$

(b) $m = (2 - 0)/(3 - 0) = 2/3$ so $y = 2x/3$

37. $y = -2x + 4$

38. $y = 5x - 3$

39. The slope m of the line must equal the slope of $y = 4x - 2$, thus $m = 4$ so the equation is $y = 4x + 7$.40. The slope of the line $3x + 2y = 5$ is $-3/2$ so the line through $(-1, 2)$ with this slope is $y - 2 = -\frac{3}{2}(x + 1)$; $y = -\frac{3}{2}x + \frac{1}{2}$.41. The slope m of the line must be the negative reciprocal of the slope of $y = 5x + 9$, thus $m = -1/5$ and the equation is $y = -x/5 + 6$.42. The slope of the line $x - 4y = 7$ is $1/4$ so a line perpendicular to it must have a slope of -4 ; $y + 4 = -4(x - 3)$; $y = -4x + 8$.

43. $y - 4 = \frac{-7 - 4}{1 - 2}(x - 2) = 11(x - 2)$, $y = 11x - 18$.

44. $y - 6 = \frac{1 - 6}{-2 - (-3)}(x - (-3))$, $y - 6 = -5(x + 3)$, $y = -5x - 9$.

45. The line passes through $(0, 2)$ and $(-4, 0)$, thus $m = \frac{0 - 2}{-4 - 0} = \frac{1}{2}$ so $y = \frac{1}{2}x + 2$.46. The line passes through $(0, b)$ and $(a, 0)$, thus $m = \frac{0 - b}{a - 0} = -\frac{b}{a}$, so the equation is $y = -\frac{b}{a}x + b$.

47. $y = 1$

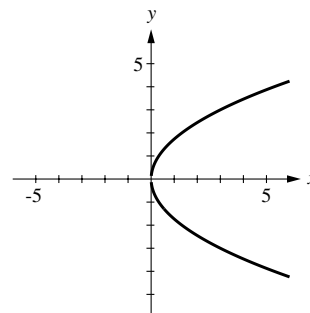
48. $y = -8$

49. (a) $m_1 = 4$, $m_2 = 4$; parallel because $m_1 = m_2$ (b) $m_1 = 2$, $m_2 = -1/2$; perpendicular because $m_1 m_2 = -1$ (c) $m_1 = 5/3$, $m_2 = 5/3$; parallel because $m_1 = m_2$ (d) If $A \neq 0$ and $B \neq 0$, then $m_1 = -A/B$, $m_2 = B/A$ and the lines are perpendicular because $m_1 m_2 = -1$. If either A or B (but not both) is zero, then the lines are perpendicular because one is horizontal and the other is vertical.(e) $m_1 = 4$, $m_2 = 1/4$; neither50. (a) $m_1 = -5$, $m_2 = -5$; parallel because $m_1 = m_2$ (b) $m_1 = 2$, $m_2 = -1/2$; perpendicular because $m_1 m_2 = -1$.(c) $m_1 = -4/5$, $m_2 = 5/4$; perpendicular because $m_1 m_2 = -1$.(d) If $B \neq 0$, then $m_1 = m_2 = -A/B$ and the lines are parallel because $m_1 = m_2$. If $B = 0$ (and $A \neq 0$), then the lines are parallel because they are both perpendicular to the x -axis.(e) $m_1 = 1/2$, $m_2 = 2$; neither

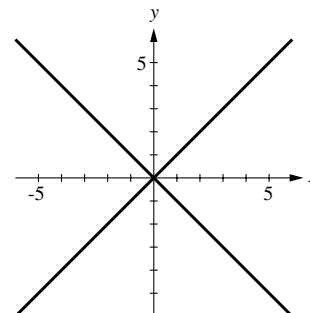
51. $y = (-3/k)x + 4/k$, $k \neq 0$

(a) $-3/k = 2$, $k = -3/2$ (b) $4/k = 5$, $k = 4/5$ (c) $3(-2) + k(4) = 4$, $k = 5/2$ (d) The slope of $2x - 5y = 1$ is $2/5$ so $-3/k = 2/5$, $k = -15/2$.(e) The slope of $4x + 3y = 2$ is $-4/3$ so the slope of a line perpendicular to it is $3/4$; $-3/k = 3/4$, $k = -4$.

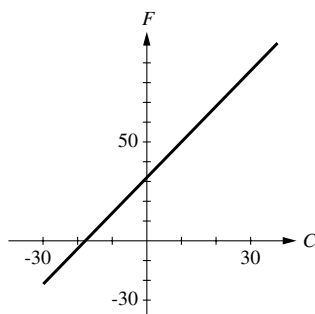
52. $y^2 = 3x$: the union of the graphs of $y = \sqrt{3x}$ and $y = -\sqrt{3x}$



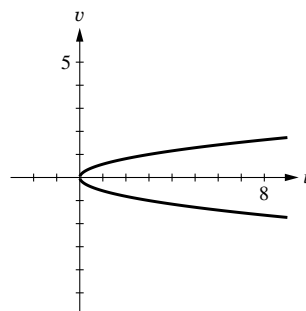
53. $(x - y)(x + y) = 0$: the union of the graphs of $x - y = 0$ and $x + y = 0$



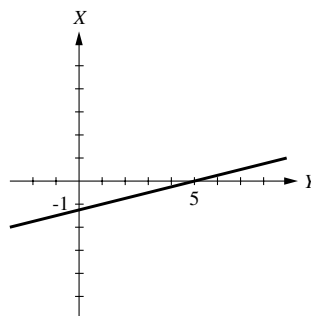
54. $F = \frac{9}{5}C + 32$



55. $u = 3v^2$



56. $Y = 4X + 5$



57. Solve $x = 5t + 2$ for t to get $t = \frac{1}{5}x - \frac{2}{5}$, so $y = \left(\frac{1}{5}x - \frac{2}{5}\right) - 3 = \frac{1}{5}x - \frac{17}{5}$, which is a line.

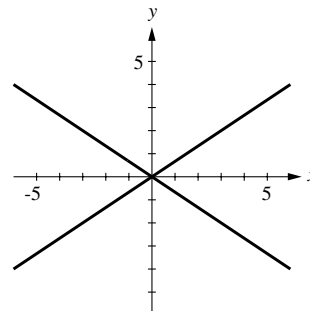
58. Solve $x = 1 + 3t^2$ for t^2 to get $t^2 = \frac{1}{3}x - \frac{1}{3}$, so $y = 2 - \left(\frac{1}{3}x - \frac{1}{3}\right) = -\frac{1}{3}x + \frac{7}{3}$, which is a line; $1 + 3t^2 \geq 1$ for all t so $x \geq 1$.

59. An equation of the line through $(1, 4)$ and $(2, 1)$ is $y = -3x + 7$. It crosses the y -axis at $y = 7$, and the x -axis at $x = 7/3$, so the area of the triangle is $\frac{1}{2}(7)(7/3) = 49/6$.

60. $(2x - 3y)(2x + 3y) = 0$, so

$$2x - 3y = 0, y = \frac{2}{3}x \text{ or } 2x + 3y = 0,$$

$$y = -\frac{2}{3}x. \text{ The graph consists of the lines } y = \pm \frac{2}{3}x.$$



61. (a) yes
(e) yes

(b) yes
(f) yes

(c) no
(g) no

(d) yes

APPENDIX D

Distances, Circles, and Quadratic Equations

EXERCISE SET D

1. in the proof of Theorem D.1

2. (a) $d = \sqrt{(-1-2)^2 + (1-5)^2} = \sqrt{9+16} = \sqrt{25} = 5$

(b) $\left(\frac{2+(-1)}{2}, \frac{5+1}{2}\right) = (1/2, 3)$

3. (a) $d = \sqrt{(1-7)^2 + (9-1)^2} = \sqrt{36+64} = \sqrt{100} = 10$

(b) $\left(\frac{7+1}{2}, \frac{1+9}{2}\right) = (4, 5)$

4. (a) $d = \sqrt{(-3-2)^2 + (6-0)^2} = \sqrt{25+36} = \sqrt{61}$

(b) $\left(\frac{2+(-3)}{2}, \frac{0+6}{2}\right) = (-1/2, 3)$

5. (a) $d = \sqrt{[-7-(-2)]^2 + [-4-(-6)]^2} = \sqrt{25+4} = \sqrt{29}$

(b) $\left(\frac{-2+(-7)}{2}, \frac{-6+(-4)}{2}\right) = (-9/2, -5)$

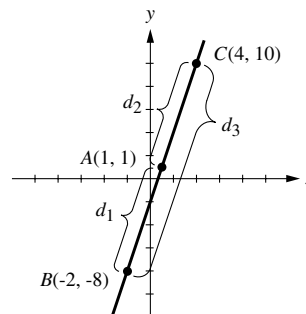
6. Let $A(1, 1)$, $B(-2, -8)$, and $C(4, 10)$ be the given points (see diagram). A , B , and C lie on a straight line if and only if $d_1 + d_2 = d_3$, where d_1 , d_2 , and d_3 are the lengths of the line segments AB , AC , and BC . But

$$d_1 = \sqrt{(-2-1)^2 + (-8-1)^2} = 3\sqrt{10},$$

$$d_2 = \sqrt{(4-1)^2 + (10-1)^2} = 3\sqrt{10},$$

$$d_3 = \sqrt{(4+2)^2 + (10+8)^2} = 6\sqrt{10}; \text{ because } d_1 + d_2 = d_3,$$

it follows that A , B , and C lie on a straight line.



7. Let $A(5, -2)$, $B(6, 5)$, and $C(2, 2)$ be the given vertices and a , b , and c the lengths of the sides opposite these vertices; then

$$a = \sqrt{(2-6)^2 + (2-5)^2} = \sqrt{25} = 5 \text{ and } b = \sqrt{(2-5)^2 + (2+2)^2} = \sqrt{25} = 5.$$

Triangle ABC is isosceles because it has two equal sides ($a = b$).

8. A triangle is a right triangle if and only if the square of the longest side is equal to the sum of the squares of the other two sides (Pythagorean theorem). With $A(1, 3)$, $B(4, 2)$, and $C(-2, -6)$ as vertices and s_1 , s_2 , and s_3 the lengths of the sides opposite these vertices we find that

$$s_1^2 = (-2-4)^2 + (-6-2)^2 = 100, \quad s_2^2 = (-2-1)^2 + (-6-3)^2 = 90, \quad s_3^2 = (4-1)^2 + (2-3)^2 = 10,$$

and that $s_1^2 = s_2^2 + s_3^2$, so ABC is a right triangle. The right angle occurs at the vertex $A(1, 3)$.

9. $P_1(0, -2)$, $P_2(-4, 8)$, and $P_3(3, 1)$ all lie on a circle whose center is $C(-2, 3)$ if the points P_1 , P_2 and P_3 are equidistant from C . Denoting the distances between P_1 , P_2 , P_3 and C by d_1 , d_2 and d_3 we find that $d_1 = \sqrt{(0+2)^2 + (-2-3)^2} = \sqrt{29}$, $d_2 = \sqrt{(-4+2)^2 + (8-3)^2} = \sqrt{29}$, and $d_3 = \sqrt{(3+2)^2 + (1-3)^2} = \sqrt{29}$, so P_1 , P_2 and P_3 lie on a circle whose center is $C(-2, 3)$ because $d_1 = d_2 = d_3$.

10. The distance between $(t, 2t - 6)$ and $(0, 4)$ is

$$\sqrt{(t-0)^2 + (2t-6-4)^2} = \sqrt{t^2 + (2t-10)^2} = \sqrt{5t^2 - 40t + 100};$$

the distance between $(t, 2t - 6)$ and $(8, 0)$ is $\sqrt{(t-8)^2 + (2t-6)^2} = \sqrt{5t^2 - 40t + 100}$,
so $(t, 2t - 6)$ is equidistant from $(0, 4)$ and $(8, 0)$.

11. If $(2, k)$ is equidistant from $(3, 7)$ and $(9, 1)$, then

$$\sqrt{(2-3)^2 + (k-7)^2} = \sqrt{(2-9)^2 + (k-1)^2}, \quad 1 + (k-7)^2 = 49 + (k-1)^2,$$

$$1 + k^2 - 14k + 49 = 49 + k^2 - 2k + 1, \quad -12k = 0, \quad k = 0.$$

12. $(x-3)/2 = 4$ and $(y+2)/2 = -5$ so $x = 11$ and $y = -12$.

13. The slope of the line segment joining $(2, 8)$ and $(-4, 6)$ is $\frac{6-8}{-4-2} = \frac{1}{3}$ so the slope of the perpendicular bisector is -3 . The midpoint of the line segment is $(-1, 7)$ so an equation of the bisector is $y - 7 = -3(x + 1)$; $y = -3x + 4$.

14. The slope of the line segment joining $(5, -1)$ and $(4, 8)$ is $\frac{8-(-1)}{4-5} = -9$ so the slope of the perpendicular bisector is $\frac{1}{9}$. The midpoint of the line segment is $(9/2, 7/2)$ so an equation of the bisector is

$$y - \frac{7}{2} = \frac{1}{9} \left(x - \frac{9}{2} \right); \quad y = \frac{1}{9}x + 3.$$

15. Method (see figure): Find an equation of the perpendicular bisector of the line segment joining $A(3, 3)$ and $B(7, -3)$. All points on this perpendicular bisector are equidistant from A and B , thus find where it intersects the given line.

The midpoint of AB is $(5, 0)$, the slope of AB is $-3/2$ thus the slope of the perpendicular bisector is $2/3$ so an equation is

$$y - 0 = \frac{2}{3}(x - 5)$$

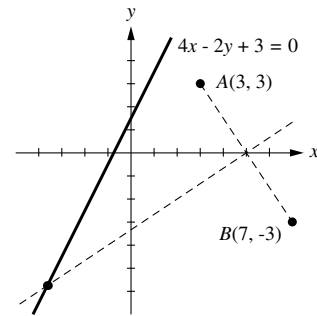
$$3y = 2x - 10$$

$$2x - 3y - 10 = 0.$$

The solution of the system

$$\begin{cases} 4x - 2y + 3 = 0 \\ 2x - 3y - 10 = 0 \end{cases}$$

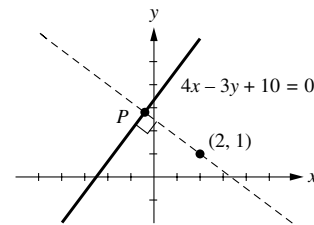
gives the point $(-29/8, -23/4)$.



16. (a) $y = 4$ is a horizontal line, so the vertical distance is $|4 - (-2)| = |6| = 6$.
(b) $x = -1$ is a vertical line, so the horizontal distance is $|-1 - 3| = |-4| = 4$.

17. Method (see figure): write an equation of the line that goes through the given point and that is perpendicular to the given line; find the point P where this line intersects the given line; find the distance between P and the given point.

The slope of the given line is $4/3$, so the slope of a line perpendicular to it is $-3/4$.



The line through $(2, 1)$ having a slope of $-3/4$ is $y - 1 = -\frac{3}{4}(x - 2)$ or, after simplification, $3x + 4y = 10$ which when solved simultaneously with $4x - 3y + 10 = 0$ yields $(-2/5, 14/5)$ as the point of intersection. The distance d between $(-2/5, 14/5)$ and $(2, 1)$ is $d = \sqrt{(2 + 2/5)^2 + (1 - 14/5)^2} = 3$.

18. (See the solution to Exercise 17 for a description of the method.) The slope of the line $5x + 12y - 36 = 0$ is $-5/12$. The line through $(8, 4)$ and perpendicular to the given line is $y - 4 = \frac{12}{5}(x - 8)$ or, after simplification, $12x - 5y = 76$. The point of intersection of this line with the given line is found to be $(\frac{84}{13}, \frac{4}{13})$ and the distance between it and $(8, 4)$ is 4.
19. If $B = 0$, then the line $Ax + C = 0$ is vertical and $x = -C/A$ for each point on the line. The line through (x_0, y_0) and perpendicular to the given line is horizontal and intersects the given line at the point $(-C/A, y_0)$. The distance d between $(-C/A, y_0)$ and (x_0, y_0) is

$$d = \sqrt{(x_0 + C/A)^2 + (y_0 - y_0)^2} = \sqrt{\frac{(Ax_0 + C)^2}{A^2}} = \frac{|Ax_0 + C|}{\sqrt{A^2}}$$

which is the value of $\frac{|Ax_0 + By_0 + C|}{\sqrt{A^2 + B^2}}$ for $B = 0$.

If $B \neq 0$, then the slope of the given line is $-A/B$ and the line through (x_0, y_0) and perpendicular to the given line is

$$y - y_0 = \frac{B}{A}(x - x_0), \quad Ay - Ay_0 = Bx - Bx_0, \quad Bx - Ay = Bx_0 - Ay_0.$$

The point of intersection of this line and the given line is obtained by solving

$$Ax + By = -C \quad \text{and} \quad Bx - Ay = Bx_0 - Ay_0.$$

Multiply the first equation through by A and the second by B and add the results to get

$$(A^2 + B^2)x = B^2x_0 - AB y_0 - AC \quad \text{so} \quad x = \frac{B^2x_0 - AB y_0 - AC}{A^2 + B^2}$$

$$\text{Similarly, by multiplying by } B \text{ and } -A, \text{ we get } y = \frac{-ABx_0 + A^2y_0 - BC}{A^2 + B^2}.$$

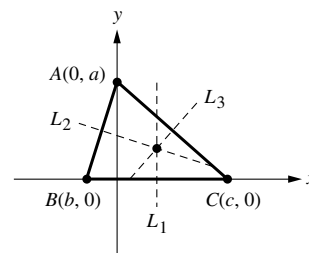
The square of the distance d between (x, y) and (x_0, y_0) is

$$\begin{aligned} d^2 &= \left[x_0 - \frac{B^2x_0 - AB y_0 - AC}{A^2 + B^2} \right]^2 + \left[y_0 - \frac{-ABx_0 + A^2y_0 - BC}{A^2 + B^2} \right]^2 \\ &= \frac{(A^2x_0 + AB y_0 + AC)^2}{(A^2 + B^2)^2} + \frac{(ABx_0 + B^2y_0 + BC)^2}{(A^2 + B^2)^2} \\ &= \frac{A^2(Ax_0 + By_0 + C)^2 + B^2(Ax_0 + By_0 + C)^2}{(A^2 + B^2)^2} \\ &= \frac{(Ax_0 + By_0 + C)^2(A^2 + B^2)}{(A^2 + B^2)^2} = \frac{(Ax_0 + By_0 + C)^2}{A^2 + B^2} \end{aligned}$$

$$\text{so } d = \frac{|Ax_0 + By_0 + C|}{\sqrt{A^2 + B^2}}.$$

20. $d = \frac{|4(2) - 3(1) + 10|}{\sqrt{4^2 + (-3)^2}} = \frac{|15|}{\sqrt{25}} = \frac{15}{5} = 3.$ 21. $d = \frac{|5(8) + 12(4) - 36|}{\sqrt{5^2 + 12^2}} = \frac{|52|}{\sqrt{169}} = \frac{52}{13} = 4.$

22. Method (see figure): Let $A(0, a)$, $B(b, 0)$, and $C(c, 0)$ be the given vertices; find equations for the perpendicular bisectors L_1 , L_2 , and L_3 and show that they all intersect at the same point.



line L_1 : The midpoint of BC is $\left(\frac{b+c}{2}, 0\right)$ and since

L_1 is vertical, an equation for L_1 is $x = \frac{b+c}{2}$;

line L_2 : The midpoint of AB is $\left(\frac{b}{2}, \frac{a}{2}\right)$; the slope of AB is $-\frac{a}{b}$ (if $b \neq 0$) so the slope of

L_2 is $\frac{b}{a}$ (even if $b = 0$) and an equation of L_2 is $y - \frac{a}{2} = \frac{b}{a} \left(x - \frac{b}{2}\right)$;

line L_3 : The midpoint of AC is $\left(\frac{c}{2}, \frac{a}{2}\right)$; the slope of AC is $-\frac{a}{c}$ (if $c \neq 0$) so the slope of

L_3 is $\frac{c}{a}$ (even if $c = 0$) and an equation of L_3 is $y - \frac{a}{2} = \frac{c}{a} \left(x - \frac{c}{2}\right)$.

For the point of intersection of L_1 and L_2 , solve $x = \frac{b+c}{2}$ and $y - \frac{a}{2} = \frac{b}{a} \left(x - \frac{b}{2}\right)$.

The point is found to be $\left(\frac{b+c}{2}, \frac{a^2+bc}{2a}\right)$. The point of intersection of L_1 and L_3 is obtained by

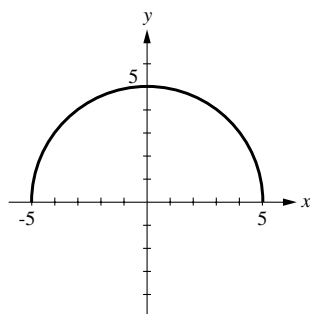
solving the system $x = \frac{b+c}{2}$ and $y - \frac{a}{2} = \frac{c}{a} \left(x - \frac{c}{2}\right)$, its solution yields the point $\left(\frac{b+c}{2}, \frac{a^2+bc}{2a}\right)$.

So L_1 , L_2 , and L_3 all intersect at the same point.

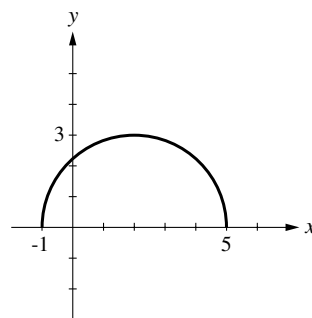
23. (a) center $(0,0)$, radius 5 (b) center $(1,4)$, radius 4
 (c) center $(-1, -3)$, radius $\sqrt{5}$ (d) center $(0, -2)$, radius 1
24. (a) center $(0,0)$, radius 3 (b) center $(3,5)$, radius 6
 (c) center $(-4, -1)$, radius $\sqrt{8}$ (d) center $(-1, 0)$, radius 1
25. $(x-3)^2 + (y-(-2))^2 = 4^2$, $(x-3)^2 + (y+2)^2 = 16$
26. $(x-1)^2 + (y-0)^2 = (\sqrt{8}/2)^2$, $(x-1)^2 + y^2 = 2$
27. $r = 8$ because the circle is tangent to the x -axis, so $(x+4)^2 + (y-8)^2 = 64$.
28. $r = 5$ because the circle is tangent to the y -axis, so $(x-5)^2 + (y-8)^2 = 25$.
29. $(0,0)$ is on the circle, so $r = \sqrt{(-3-0)^2 + (-4-0)^2} = 5$; $(x+3)^2 + (y+4)^2 = 25$.
30. $r = \sqrt{(4-1)^2 + (-5-3)^2} = \sqrt{73}$; $(x-4)^2 + (y+5)^2 = 73$.
31. The center is the midpoint of the line segment joining $(2,0)$ and $(0,2)$ so the center is at $(1,1)$. The radius is $r = \sqrt{(2-1)^2 + (0-1)^2} = \sqrt{2}$, so $(x-1)^2 + (y-1)^2 = 2$.
32. The center is the midpoint of the line segment joining $(6,1)$ and $(-2,3)$, so the center is at $(2,2)$. The radius is $r = \sqrt{(6-2)^2 + (1-2)^2} = \sqrt{17}$, so $(x-2)^2 + (y-2)^2 = 17$.
33. $(x^2 - 2x) + (y^2 - 4y) = 11$, $(x^2 - 2x + 1) + (y^2 - 4y + 4) = 11 + 1 + 4$, $(x-1)^2 + (y-2)^2 = 16$; center $(1,2)$ and radius 4

34. $(x^2 + 8x) + y^2 = -8$, $(x^2 + 8x + 16) + y^2 = -8 + 16$, $(x + 4)^2 + y^2 = 8$; center $(-4, 0)$ and radius $2\sqrt{2}$
35. $2(x^2 + 2x) + 2(y^2 - 2y) = 0$, $2(x^2 + 2x + 1) + 2(y^2 - 2y + 1) = 2 + 2$, $(x + 1)^2 + (y - 1)^2 = 2$; center $(-1, 1)$ and radius $\sqrt{2}$
36. $6(x^2 - x) + 6(y^2 + y) = 3$, $6(x^2 - x + 1/4) + 6(y^2 + y + 1/4) = 3 + 6/4 + 6/4$, $(x - 1/2)^2 + (y + 1/2)^2 = 1$; center $(1/2, -1/2)$ and radius 1
37. $(x^2 + 2x) + (y^2 + 2y) = -2$, $(x^2 + 2x + 1) + (y^2 + 2y + 1) = -2 + 1 + 1$, $(x + 1)^2 + (y + 1)^2 = 0$; the point $(-1, -1)$
38. $(x^2 - 4x) + (y^2 - 6y) = -13$, $(x^2 - 4x + 4) + (y^2 - 6y + 9) = -13 + 4 + 9$, $(x - 2)^2 + (y - 3)^2 = 0$; the point $(2, 3)$
39. $x^2 + y^2 = 1/9$; center $(0, 0)$ and radius $1/3$
40. $x^2 + y^2 = 4$; center $(0, 0)$ and radius 2
41. $x^2 + (y^2 + 10y) = -26$, $x^2 + (y^2 + 10y + 25) = -26 + 25$, $x^2 + (y + 5)^2 = -1$; no graph
42. $(x^2 - 10x) + (y^2 - 2y) = -29$, $(x^2 - 10x + 25) + (y^2 - 2y + 1) = -29 + 25 + 1$, $(x - 5)^2 + (y - 1)^2 = -3$; no graph
43. $16\left(x^2 + \frac{5}{2}x\right) + 16(y^2 + y) = 7$, $16\left(x^2 + \frac{5}{2}x + \frac{25}{16}\right) + 16\left(y^2 + y + \frac{1}{4}\right) = 7 + 25 + 4$, $(x + 5/4)^2 + (y + 1/2)^2 = 9/4$; center $(-5/4, -1/2)$ and radius $3/2$
44. $4(x^2 - 4x) + 4(y^2 - 6y) = 9$, $4(x^2 - 4x + 4) + 4(y^2 - 6y + 9) = 9 + 16 + 36$, $(x - 2)^2 + (y - 3)^2 = 61/4$; center $(2, 3)$ and radius $\sqrt{61}/2$
45. (a) $y^2 = 16 - x^2$, so $y = \pm\sqrt{16 - x^2}$. The bottom half is $y = -\sqrt{16 - x^2}$.
 (b) Complete the square in y to get $(y - 2)^2 = 3 - 2x - x^2$, so $y - 2 = \pm\sqrt{3 - 2x - x^2}$, or $y = 2 \pm \sqrt{3 - 2x - x^2}$. The top half is $y = 2 + \sqrt{3 - 2x - x^2}$.
46. (a) $x^2 = 9 - y^2$ so $x = \pm\sqrt{9 - y^2}$. The right half is $x = \sqrt{9 - y^2}$.
 (b) Complete the square in x to get $(x - 2)^2 = 1 - y^2$ so $x - 2 = \pm\sqrt{1 - y^2}$, $x = 2 \pm \sqrt{1 - y^2}$. The left half is $x = 2 - \sqrt{1 - y^2}$.

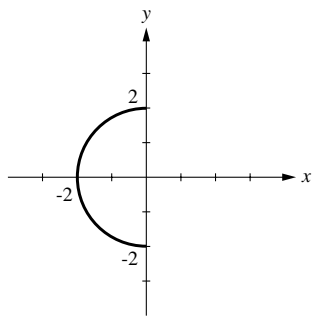
47. (a)

(b) $y = \sqrt{5 + 4x - x^2}$

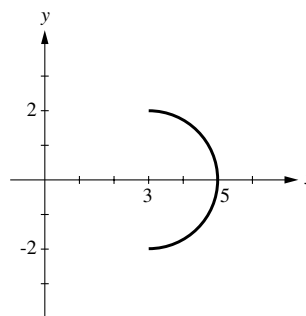
$$\begin{aligned}
 &= \sqrt{5 - (x^2 - 4x)} \\
 &= \sqrt{5 + 4 - (x^2 - 4x + 4)} \\
 &= \sqrt{9 - (x - 2)^2}
 \end{aligned}$$



48. (a)

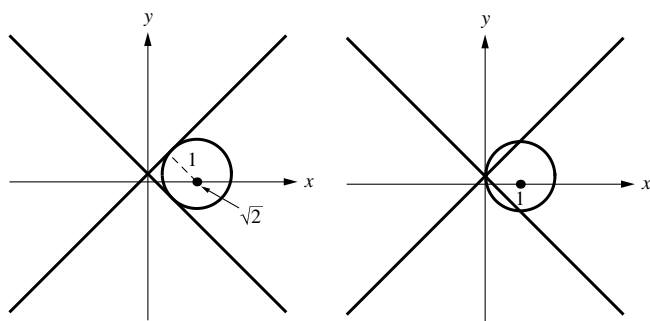


(b)



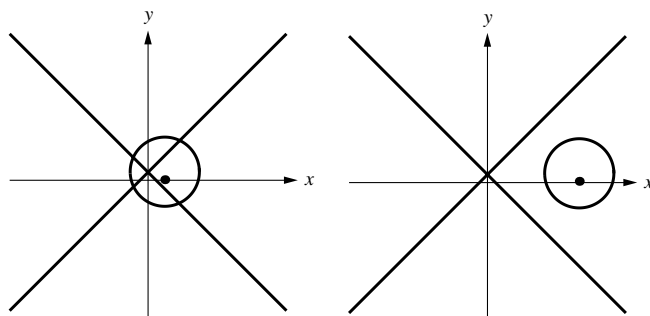
49. The tangent line is perpendicular to the radius at the point. The slope of the radius is $4/3$, so the slope of the perpendicular is $-3/4$. An equation of the tangent line is $y - 4 = -\frac{3}{4}(x - 3)$, or $y = -\frac{3}{4}x + \frac{25}{4}$.
50. (a) $(x + 1)^2 + y^2 = 10$, center at $C(-1, 0)$. The slope of CP is $-1/3$ so the slope of the tangent is 3 ; $y + 1 = 3(x - 2)$, $y = 3x - 7$.
- (b) $(x - 3)^2 + (y + 2)^2 = 26$, center at $C(3, -2)$. The slope of CP is 5 so the slope of the tangent is $-\frac{1}{5}$; $y - 3 = -\frac{1}{5}(x - 4)$, $y = -\frac{1}{5}x + \frac{19}{5}$.
51. (a) The center of the circle is at $(0, 0)$ and its radius is $\sqrt{20} = 2\sqrt{5}$. The distance between P and the center is $\sqrt{(-1)^2 + (2)^2} = \sqrt{5}$ which is less than $2\sqrt{5}$, so P is inside the circle.
- (b) Draw the diameter of the circle that passes through P , then the shorter segment of the diameter is the shortest line that can be drawn from P to the circle, and the longer segment is the longest line that can be drawn from P to the circle (can you prove it?). Thus, the smallest distance is $2\sqrt{5} - \sqrt{5} = \sqrt{5}$, and the largest is $2\sqrt{5} + \sqrt{5} = 3\sqrt{5}$.
52. (a) $x^2 + (y - 1)^2 = 5$, center at $C(0, 1)$ and radius $\sqrt{5}$. The distance between P and C is $3\sqrt{5}/2$ so P is outside the circle.
- (b) The smallest distance is $\frac{3}{2}\sqrt{5} - \sqrt{5} = \frac{1}{2}\sqrt{5}$, the largest distance is $\frac{3}{2}\sqrt{5} + \sqrt{5} = \frac{5}{2}\sqrt{5}$.
53. Let (a, b) be the coordinates of T (or T'). The radius from $(0, 0)$ to T (or T') will be perpendicular to L (or L') so, using slopes, $b/a = -(a - 3)/b$, $a^2 + b^2 = 3a$. But (a, b) is on the circle so $a^2 + b^2 = 1$, thus $3a = 1$, $a = 1/3$. Let $a = 1/3$ in $a^2 + b^2 = 1$ to get $b^2 = 8/9$, $b = \pm\sqrt{8}/3$. The coordinates of T and T' are $(1/3, \sqrt{8}/3)$ and $(1/3, -\sqrt{8}/3)$.
54. (a) $\sqrt{(x - 2)^2 + (y - 0)^2} = \sqrt{2}\sqrt{(x - 0)^2 + (y - 1)^2}$; square both sides and expand to get $x^2 - 4x + 4 + y^2 = 2(x^2 + y^2 - 2y + 1)$, $x^2 + y^2 + 4x - 4y - 2 = 0$, which is a circle.
- (b) $(x^2 + 4x) + (y^2 - 4y) = 2$, $(x^2 + 4x + 4) + (y^2 - 4y + 4) = 2 + 4 + 4$, $(x + 2)^2 + (y - 2)^2 = 10$; center $(-2, 2)$, radius $\sqrt{10}$.
55. (a) $[(x - 4)^2 + (y - 1)^2] + [(x - 2)^2 + (y + 5)^2] = 45$
 $x^2 - 8x + 16 + y^2 - 2y + 1 + x^2 - 4x + 4 + y^2 + 10y + 25 = 45$
 $2x^2 + 2y^2 - 12x + 8y + 1 = 0$, which is a circle.
- (b) $2(x^2 - 6x) + 2(y^2 + 4y) = -1$, $2(x^2 - 6x + 9) + 2(y^2 + 4y + 4) = -1 + 18 + 8$,
 $(x - 3)^2 + (y + 2)^2 = 25/2$; center $(3, -2)$, radius $5/\sqrt{2}$.
56. If $x^2 - y^2 = 0$, then $y^2 = x^2$ so $y = x$ or $y = -x$. The graph of $x^2 - y^2 = 0$ consists of the graphs of the two lines $y = \pm x$. The graph of $(x - c)^2 + y^2 = 1$ is a circle of radius 1 with center at $(c, 0)$.

Examine the figure to see that the system cannot have just one solution, and has 0 solutions if $|c| > \sqrt{2}$, 2 solutions if $|c| = \sqrt{2}$, 3 solutions if $|c| = 1$, and 4 solutions if $|c| < \sqrt{2}$, $|c| \neq 1$.



2 solutions

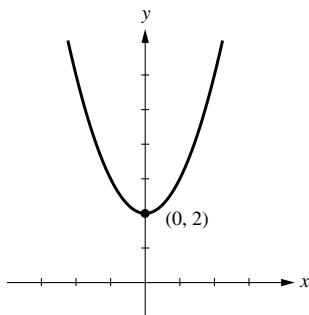
3 solutions



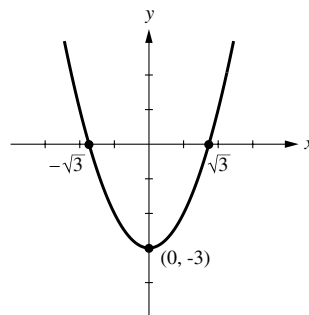
4 solutions

0 solutions

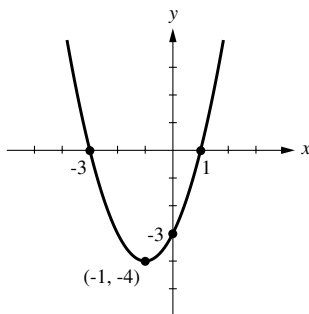
57. $y = x^2 + 2$



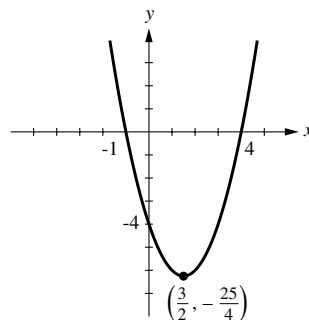
58. $y = x^2 - 3$



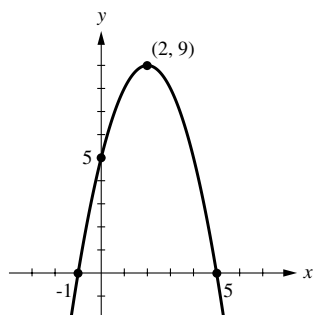
59. $y = x^2 + 2x - 3$



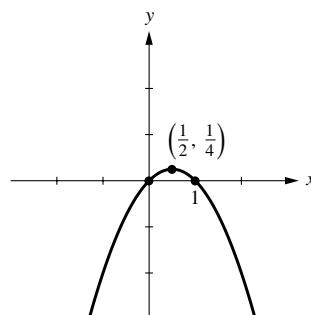
60. $y = x^2 - 3x - 4$



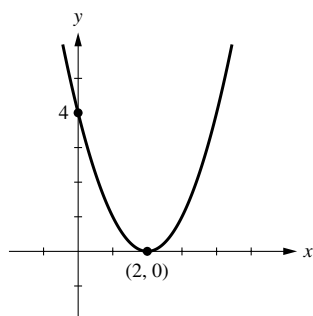
61. $y = -x^2 + 4x + 5$



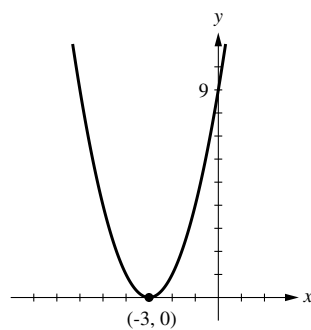
62. $y = -x^2 + x$



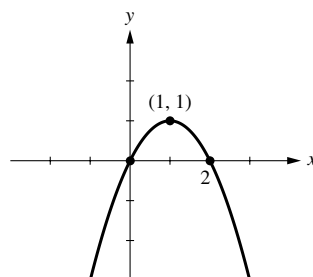
63. $y = (x - 2)^2$



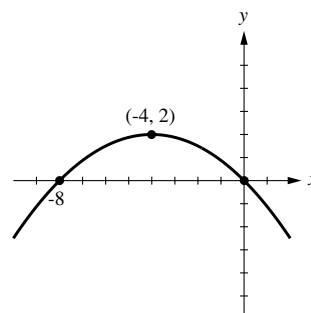
64. $y = (3 + x)^2$



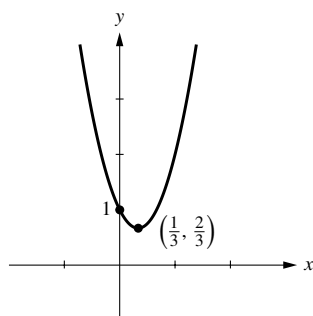
65. $x^2 - 2x + y = 0$



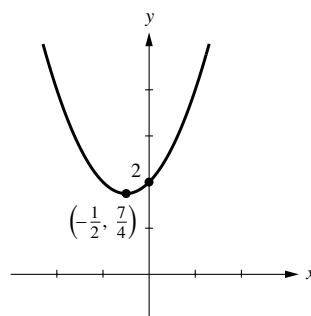
66. $x^2 + 8x + 8y = 0$



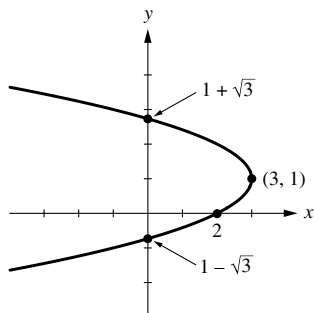
67. $y = 3x^2 - 2x + 1$



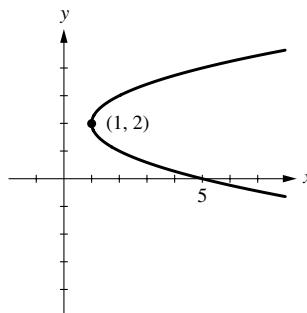
68. $y = x^2 + x + 2$



69. $x = -y^2 + 2y + 2$

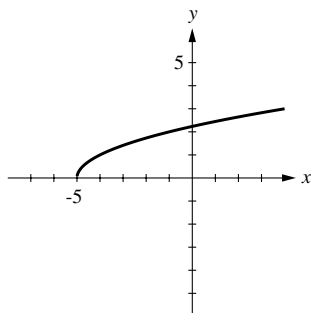


70. $x = y^2 - 4y + 5$

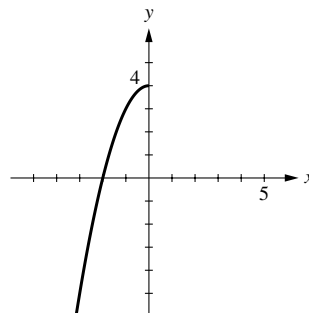


71. (a) $x^2 = 3 - y$, $x = \pm\sqrt{3 - y}$. The right half is $x = \sqrt{3 - y}$.
 (b) Complete the square in x to get $(x-1)^2 = y+1$, $x = 1 \pm \sqrt{y+1}$. The left half is $x = 1 - \sqrt{y+1}$.
72. (a) $y^2 = x + 5$, $y = \pm\sqrt{x+5}$. The upper half is $y = \sqrt{x+5}$.
 (b) Complete the square in y to get $(y - 1/2)^2 = x + 9/4$, $y - 1/2 = \pm\sqrt{x+9/4}$, $y = 1/2 \pm \sqrt{x+9/4}$. The lower half is $y = 1/2 - \sqrt{x+9/4}$.

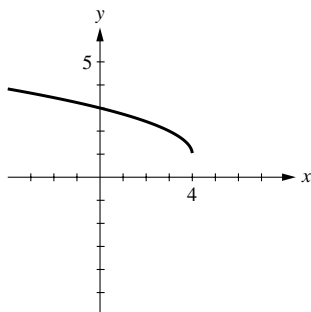
73. (a)



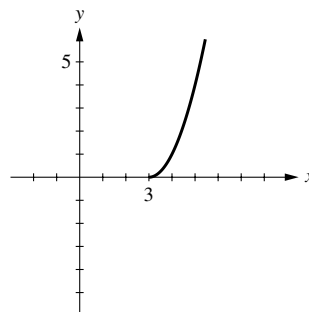
(b)



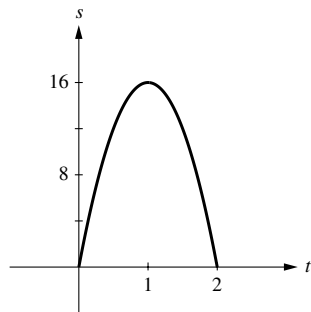
74. (a)



(b)



75. (a)



- (b) The ball will be at its highest point when $t = 1$ sec; it will rise 16 ft.

- 76.** (a) $2x + y = 500$, $y = 500 - 2x$. (b) $A = xy = x(500 - 2x) = 500x - 2x^2$.
 (c) The graph of A versus x is a parabola with its vertex (high point) at $x = -b/(2a) = -500/(-4) = 125$, so the maximum value of A is $A = 500(125) - 2(125)^2 = 31,250 \text{ ft}^2$.
- 77.** (a) $(3)(2x) + (2)(2y) = 600$, $6x + 4y = 600$, $y = 150 - 3x/2$
 (b) $A = xy = x(150 - 3x/2) = 150x - 3x^2/2$
 (c) The graph of A versus x is a parabola with its vertex (high point) at $x = -b/(2a) = -150/(-3) = 50$, so the maximum value of A is $A = 150(50) - 3(50)^2/2 = 3,750 \text{ ft}^2$.
- 78.** (a) $y = ax^2 + bx + c = a\left(x^2 + \frac{b}{a}x\right) + c$

$$= a\left(x^2 + \frac{b}{a}x + \frac{b^2}{4a^2}\right) + c - \frac{b^2}{4a} = a\left(x + \frac{b}{2a}\right)^2 + \left(c - \frac{b^2}{4a}\right)$$

 (b) If $a < 0$ then y is always less than $c - \frac{b^2}{4a}$ except when $x = -\frac{b}{2a}$, so the graph has its high point there. If $a > 0$ then y is always greater than $c - \frac{b^2}{4a}$ except when $x = -\frac{b}{2a}$, so the graph has its low point there.
- 79.** (a) The parabola $y = 2x^2 + 5x - 1$ opens upward and has x -intercepts of $x = (-5 \pm \sqrt{33})/4$, so $2x^2 + 5x - 1 < 0$ if $(-5 - \sqrt{33})/4 < x < (-5 + \sqrt{33})/4$.
 (b) The parabola $y = x^2 - 2x + 3$ opens upward and has no x -intercepts, so $x^2 - 2x + 3 > 0$ if $-\infty < x < +\infty$.
- 80.** (a) The parabola $y = x^2 + x - 1$ opens upward and has x -intercepts of $x = (-1 \pm \sqrt{5})/2$, so $x^2 + x - 1 > 0$ if $x < (-1 - \sqrt{5})/2$ or $x > (-1 + \sqrt{5})/2$.
 (b) The parabola $y = x^2 - 4x + 6$ opens upward and has no x -intercepts, so $x^2 - 4x + 6 < 0$ has no solution.
- 81.** (a) The t -coordinate of the vertex is $t = -40/[(2)(-16)] = 5/4$, so the maximum height is $s = 5 + 40(5/4) - 16(5/4)^2 = 30 \text{ ft}$.
 (b) $s = 5 + 40t - 16t^2 = 0$ if $t \approx 2.6 \text{ s}$
 (c) $s = 5 + 40t - 16t^2 > 12$ if $16t^2 - 40t + 7 < 0$, which is true if $(5 - 3\sqrt{2})/4 < t < (5 + 3\sqrt{2})/4$. The length of this interval is $(5 + 3\sqrt{2})/4 - (5 - 3\sqrt{2})/4 = 3\sqrt{2}/2 \approx 2.1 \text{ s}$.
- 82.** $x + 3 - x^2 > 0$, $x^2 - x - 3 < 0$, $(1 - \sqrt{13})/2 < x < (1 + \sqrt{13})/2$

APPENDIX E

Trigonometry Review

EXERCISE SET E

1. (a) $5\pi/12$ (b) $13\pi/6$ (c) $\pi/9$ (d) $23\pi/30$
2. (a) $7\pi/3$ (b) $\pi/12$ (c) $5\pi/4$ (d) $11\pi/12$
3. (a) 12° (b) $(270/\pi)^\circ$ (c) 288° (d) 540°
4. (a) 18° (b) $(360/\pi)^\circ$ (c) 72° (d) 210°

5.

	$\sin \theta$	$\cos \theta$	$\tan \theta$	$\csc \theta$	$\sec \theta$	$\cot \theta$
(a)	$\sqrt{21}/5$	$2/5$	$\sqrt{21}/2$	$5/\sqrt{21}$	$5/2$	$2/\sqrt{21}$
(b)	$3/4$	$\sqrt{7}/4$	$3/\sqrt{7}$	$4/3$	$4/\sqrt{7}$	$\sqrt{7}/3$
(c)	$3/\sqrt{10}$	$1/\sqrt{10}$	3	$\sqrt{10}/3$	$\sqrt{10}$	$1/3$

6.

	$\sin \theta$	$\cos \theta$	$\tan \theta$	$\csc \theta$	$\sec \theta$	$\cot \theta$
(a)	$1/\sqrt{2}$	$1/\sqrt{2}$	1	$\sqrt{2}$	$\sqrt{2}$	1
(b)	$3/5$	$4/5$	$3/4$	$5/3$	$5/4$	$4/3$
(c)	$1/4$	$\sqrt{15}/4$	$1/\sqrt{15}$	4	$4/\sqrt{15}$	$\sqrt{15}$

7. $\sin \theta = 3/\sqrt{10}$, $\cos \theta = 1/\sqrt{10}$ 8. $\sin \theta = \sqrt{5}/3$, $\tan \theta = \sqrt{5}/2$

9. $\tan \theta = \sqrt{21}/2$, $\csc \theta = 5/\sqrt{21}$ 10. $\cot \theta = \sqrt{15}$, $\sec \theta = 4/\sqrt{15}$

11. Let x be the length of the side adjacent to θ , then $\cos \theta = x/6 = 0.3$, $x = 1.8$.

12. Let x be the length of the hypotenuse, then $\sin \theta = 2.4/x = 0.8$, $x = 2.4/0.8 = 3$.

13.

	θ	$\sin \theta$	$\cos \theta$	$\tan \theta$	$\csc \theta$	$\sec \theta$	$\cot \theta$
(a)	225°	$-1/\sqrt{2}$	$-1/\sqrt{2}$	1	$-\sqrt{2}$	$-\sqrt{2}$	1
(b)	-210°	$1/2$	$-\sqrt{3}/2$	$-1/\sqrt{3}$	2	$-2/\sqrt{3}$	$-\sqrt{3}$
(c)	$5\pi/3$	$-\sqrt{3}/2$	$1/2$	$-\sqrt{3}$	$-2/\sqrt{3}$	2	$-1/\sqrt{3}$
(d)	$-3\pi/2$	1	0	$—$	1	$—$	0

14.

	θ	$\sin \theta$	$\cos \theta$	$\tan \theta$	$\csc \theta$	$\sec \theta$	$\cot \theta$
(a)	330°	$-1/2$	$\sqrt{3}/2$	$-1/\sqrt{3}$	-2	$2/\sqrt{3}$	$-\sqrt{3}$
(b)	-120°	$-\sqrt{3}/2$	$-1/2$	$\sqrt{3}$	$-2/\sqrt{3}$	-2	$1/\sqrt{3}$
(c)	$9\pi/4$	$1/\sqrt{2}$	$1/\sqrt{2}$	1	$\sqrt{2}$	$\sqrt{2}$	1
(d)	-3π	0	-1	0	$—$	-1	$—$

15.

	$\sin \theta$	$\cos \theta$	$\tan \theta$	$\csc \theta$	$\sec \theta$	$\cot \theta$
(a)	4/5	3/5	4/3	5/4	5/3	3/4
(b)	-4/5	3/5	-4/3	-5/4	5/3	-3/4
(c)	1/2	$-\sqrt{3}/2$	$-1/\sqrt{3}$	2	$-2\sqrt{3}$	$-\sqrt{3}$
(d)	-1/2	$\sqrt{3}/2$	$-1/\sqrt{3}$	-2	$2/\sqrt{3}$	$-\sqrt{3}$
(e)	$1/\sqrt{2}$	$1/\sqrt{2}$	1	$\sqrt{2}$	$\sqrt{2}$	1
(f)	$1/\sqrt{2}$	$-1/\sqrt{2}$	-1	$\sqrt{2}$	$-\sqrt{2}$	-1

16.

	$\sin \theta$	$\cos \theta$	$\tan \theta$	$\csc \theta$	$\sec \theta$	$\cot \theta$
(a)	1/4	$\sqrt{15}/4$	$1/\sqrt{15}$	4	$4/\sqrt{15}$	$\sqrt{15}$
(b)	1/4	$-\sqrt{15}/4$	$-1/\sqrt{15}$	4	$-4/\sqrt{15}$	$-\sqrt{15}$
(c)	$3/\sqrt{10}$	$1/\sqrt{10}$	3	$\sqrt{10}/3$	$\sqrt{10}$	1/3
(d)	$-3/\sqrt{10}$	$-1/\sqrt{10}$	3	$-\sqrt{10}/3$	$-\sqrt{10}$	1/3
(e)	$\sqrt{21}/5$	-2/5	$-\sqrt{21}/2$	$5/\sqrt{21}$	-5/2	$-2/\sqrt{21}$
(f)	$-\sqrt{21}/5$	-2/5	$\sqrt{21}/2$	$-5/\sqrt{21}$	-5/2	$2/\sqrt{21}$

17. (a) $x = 3 \sin 25^\circ \approx 1.2679$ (b) $x = 3 / \tan(2\pi/9) \approx 3.5753$

18. (a) $x = 2 / \sin 20^\circ \approx 5.8476$ (b) $x = 3 / \cos(3\pi/11) \approx 4.5811$

19.

	$\sin \theta$	$\cos \theta$	$\tan \theta$	$\csc \theta$	$\sec \theta$	$\cot \theta$
(a)	$a/3$	$\sqrt{9-a^2}/3$	$a/\sqrt{9-a^2}$	$3/a$	$3/\sqrt{9-a^2}$	$\sqrt{9-a^2}/a$
(b)	$a/\sqrt{a^2+25}$	$5/\sqrt{a^2+25}$	$a/5$	$\sqrt{a^2+25}/a$	$\sqrt{a^2+25}/5$	$5/a$
(c)	$\sqrt{a^2-1}/a$	$1/a$	$\sqrt{a^2-1}$	$a/\sqrt{a^2-1}$	a	$1/\sqrt{a^2-1}$

20. (a) $\theta = 3\pi/4 \pm 2n\pi$ and $\theta = 5\pi/4 \pm 2n\pi$, $n = 0, 1, 2, \dots$

(b) $\theta = 5\pi/4 \pm 2n\pi$ and $\theta = 7\pi/4 \pm 2n\pi$, $n = 0, 1, 2, \dots$

21. (a) $\theta = 3\pi/4 \pm n\pi$, $n = 0, 1, 2, \dots$

(b) $\theta = \pi/3 \pm 2n\pi$ and $\theta = 5\pi/3 \pm 2n\pi$, $n = 0, 1, 2, \dots$

22. (a) $\theta = 7\pi/6 \pm 2n\pi$ and $\theta = 11\pi/6 \pm 2n\pi$, $n = 0, 1, 2, \dots$

(b) $\theta = \pi/3 \pm n\pi$, $n = 0, 1, 2, \dots$

23. (a) $\theta = \pi/6 \pm n\pi$, $n = 0, 1, 2, \dots$

(b) $\theta = 4\pi/3 \pm 2n\pi$ and $\theta = 5\pi/3 \pm 2n\pi$, $n = 0, 1, 2, \dots$

24. (a) $\theta = 3\pi/2 \pm 2n\pi$, $n = 0, 1, 2, \dots$

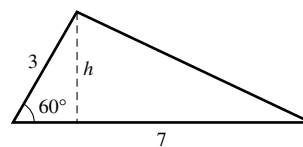
(b) $\theta = \pi \pm 2n\pi$, $n = 0, 1, 2, \dots$

25. (a) $\theta = 3\pi/4 \pm n\pi$, $n = 0, 1, 2, \dots$

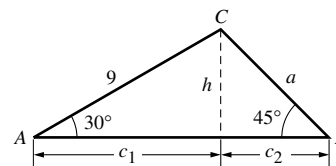
(b) $\theta = \pi/6 \pm n\pi$, $n = 0, 1, 2, \dots$

26. (a) $\theta = 2\pi/3 \pm 2n\pi$ and $\theta = 4\pi/3 \pm 2n\pi$, $n = 0, 1, 2, \dots$
 (b) $\theta = 7\pi/6 \pm 2n\pi$ and $\theta = 11\pi/6 \pm 2n\pi$, $n = 0, 1, 2, \dots$
27. (a) $\theta = \pi/3 \pm 2n\pi$ and $\theta = 2\pi/3 \pm 2n\pi$, $n = 0, 1, 2, \dots$
 (b) $\theta = \pi/6 \pm 2n\pi$ and $\theta = 11\pi/6 \pm 2n\pi$, $n = 0, 1, 2, \dots$
28. $\sin \theta = -3/5$, $\cos \theta = -4/5$, $\tan \theta = 3/4$, $\csc \theta = -5/3$, $\sec \theta = -5/4$, $\cot \theta = 4/3$
29. $\sin \theta = 2/5$, $\cos \theta = -\sqrt{21}/5$, $\tan \theta = -2/\sqrt{21}$, $\csc \theta = 5/2$, $\sec \theta = -5/\sqrt{21}$, $\cot \theta = -\sqrt{21}/2$
30. (a) $\theta = \pi/2 \pm 2n\pi$, $n = 0, 1, 2, \dots$ (b) $\theta = \pm 2n\pi$, $n = 0, 1, 2, \dots$
 (c) $\theta = \pi/4 \pm n\pi$, $n = 0, 1, 2, \dots$ (d) $\theta = \pi/2 \pm 2n\pi$, $n = 0, 1, 2, \dots$
 (e) $\theta = \pm 2n\pi$, $n = 0, 1, 2, \dots$ (f) $\theta = \pi/4 \pm n\pi$, $n = 0, 1, 2, \dots$
31. (a) $\theta = \pm n\pi$, $n = 0, 1, 2, \dots$ (b) $\theta = \pi/2 \pm n\pi$, $n = 0, 1, 2, \dots$
 (c) $\theta = \pm n\pi$, $n = 0, 1, 2, \dots$ (d) $\theta = \pm n\pi$, $n = 0, 1, 2, \dots$
 (e) $\theta = \pi/2 \pm n\pi$, $n = 0, 1, 2, \dots$ (f) $\theta = \pm n\pi$, $n = 0, 1, 2, \dots$
32. Construct a right triangle with one angle equal to 17° , measure the lengths of the sides and hypotenuse and use formula (6) for $\sin \theta$ and $\cos \theta$ to approximate $\sin 17^\circ$ and $\cos 17^\circ$.
33. (a) $s = r\theta = 4(\pi/6) = 2\pi/3$ cm (b) $s = r\theta = 4(5\pi/6) = 10\pi/3$ cm
34. $r = s/\theta = 7/(\pi/3) = 21/\pi$ 35. $\theta = s/r = 2/5$
36. $\theta = s/r$ so $A = \frac{1}{2}r^2\theta = \frac{1}{2}r^2(s/r) = \frac{1}{2}rs$
37. (a) $2\pi r = R(2\pi - \theta)$, $r = \frac{2\pi - \theta}{2\pi}R$
 (b) $h = \sqrt{R^2 - r^2} = \sqrt{R^2 - (2\pi - \theta)^2 R^2 / (4\pi^2)} = \frac{\sqrt{4\pi\theta - \theta^2}}{2\pi}R$
38. The circumference of the circular base is $2\pi r$. When cut and flattened, the cone becomes a circular sector of radius L . If θ is the central angle that subtends the arc of length $2\pi r$, then $\theta = (2\pi r)/L$ so the area S of the sector is $S = (1/2)L^2(2\pi r/L) = \pi rL$ which is the lateral surface area of the cone.

39. Let h be the altitude as shown in the figure, then
 $h = 3 \sin 60^\circ = 3\sqrt{3}/2$ so $A = \frac{1}{2}(3\sqrt{3}/2)(7) = 21\sqrt{3}/4$.

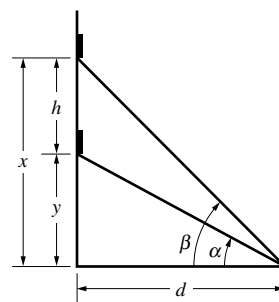


40. Draw the perpendicular from vertex C as shown in the figure, then
 $h = 9 \sin 30^\circ = 9/2$, $a = h/\sin 45^\circ = 9\sqrt{2}/2$,
 $c_1 = 9 \cos 30^\circ = 9\sqrt{3}/2$, $c_2 = a \cos 45^\circ = 9/2$,
 $c_1 + c_2 = 9(\sqrt{3} + 1)/2$, angle $C = 180^\circ - (30^\circ + 45^\circ) = 105^\circ$

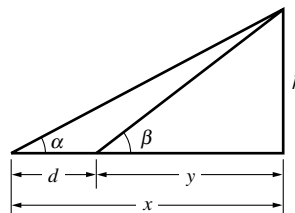


41. Let x be the distance above the ground, then $x = 10 \sin 67^\circ \approx 9.2$ ft.
 42. Let x be the height of the building, then $x = 120 \tan 76^\circ \approx 481$ ft.

43. From the figure, $h = x - y$ but $x = d \tan \beta$,
 $y = d \tan \alpha$ so $h = d(\tan \beta - \tan \alpha)$.



44. From the figure, $d = x - y$ but $x = h \cot \alpha$,
 $y = h \cot \beta$ so $d = h(\cot \alpha - \cot \beta)$,
 $h = \frac{d}{\cot \alpha - \cot \beta}$.



45. (a) $\sin 2\theta = 2 \sin \theta \cos \theta = 2(\sqrt{5}/3)(2/3) = 4\sqrt{5}/9$
 (b) $\cos 2\theta = 2 \cos^2 \theta - 1 = 2(2/3)^2 - 1 = -1/9$
46. (a) $\sin(\alpha - \beta) = \sin \alpha \cos \beta - \cos \alpha \sin \beta = (3/5)(1/\sqrt{5}) - (4/5)(2/\sqrt{5}) = -1/\sqrt{5}$
 (b) $\cos(\alpha + \beta) = \cos \alpha \cos \beta - \sin \alpha \sin \beta = (4/5)(1/\sqrt{5}) - (3/5)(2/\sqrt{5}) = -2/(5\sqrt{5})$
47. $\sin 3\theta = \sin(2\theta + \theta) = \sin 2\theta \cos \theta + \cos 2\theta \sin \theta = (2 \sin \theta \cos \theta) \cos \theta + (\cos^2 \theta - \sin^2 \theta) \sin \theta$
 $= 2 \sin \theta \cos^2 \theta + \sin \theta \cos^2 \theta - \sin^3 \theta = 3 \sin \theta \cos^2 \theta - \sin^3 \theta$; similarly, $\cos 3\theta = \cos^3 \theta - 3 \sin^2 \theta \cos \theta$
48. $\frac{\cos \theta \sec \theta}{1 + \tan^2 \theta} = \frac{\cos \theta \sec \theta}{\sec^2 \theta} = \frac{\cos \theta}{\sec \theta} = \frac{\cos \theta}{(1/\cos \theta)} = \cos^2 \theta$
49. $\frac{\cos \theta \tan \theta + \sin \theta}{\tan \theta} = \frac{\cos \theta(\sin \theta / \cos \theta) + \sin \theta}{\sin \theta / \cos \theta} = 2 \cos \theta$
50. $2 \csc 2\theta = \frac{2}{\sin 2\theta} = \frac{2}{2 \sin \theta \cos \theta} = \left(\frac{1}{\sin \theta} \right) \left(\frac{1}{\cos \theta} \right) = \csc \theta \sec \theta$
51. $\tan \theta + \cot \theta = \frac{\sin \theta}{\cos \theta} + \frac{\cos \theta}{\sin \theta} = \frac{\sin^2 \theta + \cos^2 \theta}{\sin \theta \cos \theta} = \frac{1}{\sin \theta \cos \theta} = \frac{2}{2 \sin \theta \cos \theta} = \frac{2}{\sin 2\theta} = 2 \csc 2\theta$
52. $\frac{\sin 2\theta}{\sin \theta} - \frac{\cos 2\theta}{\cos \theta} = \frac{\sin 2\theta \cos \theta - \cos 2\theta \sin \theta}{\sin \theta \cos \theta} = \frac{\sin \theta}{\sin \theta \cos \theta} = \sec \theta$
53. $\frac{\sin \theta + \cos 2\theta - 1}{\cos \theta - \sin 2\theta} = \frac{\sin \theta + (1 - 2 \sin^2 \theta) - 1}{\cos \theta - 2 \sin \theta \cos \theta} = \frac{\sin \theta(1 - 2 \sin \theta)}{\cos \theta(1 - 2 \sin \theta)} = \tan \theta$
54. Using (47), $2 \sin 2\theta \cos \theta = 2(1/2)(\sin \theta + \sin 3\theta) = \sin \theta + \sin 3\theta$
55. Using (47), $2 \cos 2\theta \sin \theta = 2(1/2)[\sin(-\theta) + \sin 3\theta] = \sin 3\theta - \sin \theta$
56. $\tan(\theta/2) = \frac{\sin(\theta/2)}{\cos(\theta/2)} = \frac{2 \sin^2(\theta/2)}{2 \sin(\theta/2) \cos(\theta/2)} = \frac{1 - \cos \theta}{\sin \theta}$

$$57. \quad \tan(\theta/2) = \frac{\sin(\theta/2)}{\cos(\theta/2)} = \frac{2\sin(\theta/2)\cos(\theta/2)}{2\cos^2(\theta/2)} = \frac{\sin\theta}{1+\cos\theta}$$

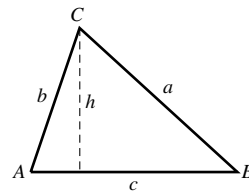
$$58. \quad \text{From (52), } \cos(\pi/3 + \theta) + \cos(\pi/3 - \theta) = 2\cos(\pi/3)\cos\theta = 2(1/2)\cos\theta = \cos\theta$$

$$59. \quad \text{From the figures, area} = \frac{1}{2}hc \text{ but } h = b\sin A$$

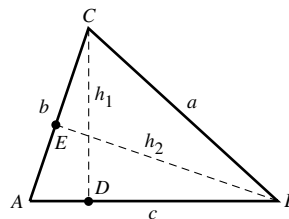
$$\text{so area} = \frac{1}{2}bc\sin A. \text{ The formulas}$$

$$\text{area} = \frac{1}{2}ac\sin B \text{ and area} = \frac{1}{2}ab\sin C$$

follow by drawing altitudes from vertices B and C , respectively.



60. From right triangles ADC and BDC ,
 $h_1 = b\sin A = a\sin B$ so $a/\sin A = b/\sin B$.
 From right triangles AEB and CEB ,
 $h_2 = c\sin A = a\sin C$ so $a/\sin A = c/\sin C$
 thus $a/\sin A = b/\sin B = c/\sin C$.



61. (a) $\sin(\pi/2 + \theta) = \sin(\pi/2)\cos\theta + \cos(\pi/2)\sin\theta = (1)\cos\theta + (0)\sin\theta = \cos\theta$
 (b) $\cos(\pi/2 + \theta) = \cos(\pi/2)\cos\theta - \sin(\pi/2)\sin\theta = (0)\cos\theta - (1)\sin\theta = -\sin\theta$
 (c) $\sin(3\pi/2 - \theta) = \sin(3\pi/2)\cos\theta - \cos(3\pi/2)\sin\theta = (-1)\cos\theta - (0)\sin\theta = -\cos\theta$
 (d) $\cos(3\pi/2 + \theta) = \cos(3\pi/2)\cos\theta - \sin(3\pi/2)\sin\theta = (0)\cos\theta - (-1)\sin\theta = \sin\theta$

$$62. \quad \tan(\alpha + \beta) = \frac{\sin(\alpha + \beta)}{\cos(\alpha + \beta)} = \frac{\sin\alpha\cos\beta + \cos\alpha\sin\beta}{\cos\alpha\cos\beta - \sin\alpha\sin\beta}, \text{ divide numerator and denominator by } \cos\alpha\cos\beta \text{ and use } \tan\alpha = \frac{\sin\alpha}{\cos\alpha} \text{ and } \tan\beta = \frac{\sin\beta}{\cos\beta} \text{ to get (38);}$$

$$\tan(\alpha - \beta) = \tan(\alpha + (-\beta)) = \frac{\tan\alpha + \tan(-\beta)}{1 - \tan\alpha\tan(-\beta)} = \frac{\tan\alpha - \tan\beta}{1 + \tan\alpha\tan\beta} \text{ because}$$

$$\tan(-\beta) = -\tan\beta.$$

63. (a) Add (34) and (36) to get $\sin(\alpha - \beta) + \sin(\alpha + \beta) = 2\sin\alpha\cos\beta$ so
 $\sin\alpha\cos\beta = (1/2)[\sin(\alpha - \beta) + \sin(\alpha + \beta)]$.
 (b) Subtract (35) from (37). (c) Add (35) and (37).

$$64. \quad \text{(a) From (47), } \sin\frac{A+B}{2}\cos\frac{A-B}{2} = \frac{1}{2}(\sin B + \sin A) \text{ so}$$

$$\sin A + \sin B = 2\sin\frac{A+B}{2}\cos\frac{A-B}{2}.$$

(b) Use (49)

(c) Use (48)

$$65. \quad \sin\alpha + \sin(-\beta) = 2\sin\frac{\alpha - \beta}{2}\cos\frac{\alpha + \beta}{2}, \text{ but } \sin(-\beta) = -\sin\beta \text{ so}$$

$$\sin\alpha - \sin\beta = 2\cos\frac{\alpha + \beta}{2}\sin\frac{\alpha - \beta}{2}.$$

- 66. (a)** From (34), $C \sin(\alpha + \phi) = C \sin \alpha \cos \phi + C \cos \alpha \sin \phi$ so $C \cos \phi = 3$ and $C \sin \phi = 5$, square and add to get $C^2(\cos^2 \phi + \sin^2 \phi) = 9 + 25$, $C^2 = 34$. If $C = \sqrt{34}$ then $\cos \phi = 3/\sqrt{34}$ and $\sin \phi = 5/\sqrt{34}$ so ϕ is the first-quadrant angle for which $\tan \phi = 5/3$. $3 \sin \alpha + 5 \cos \alpha = \sqrt{34} \sin(\alpha + \phi)$.
- (b)** Follow the procedure of part (a) to get $C \cos \phi = A$ and $C \sin \phi = B$, $C = \sqrt{A^2 + B^2}$, $\tan \phi = B/A$ where the quadrant in which ϕ lies is determined by the signs of A and B because $\cos \phi = A/C$ and $\sin \phi = B/C$, so $A \sin \alpha + B \cos \alpha = \sqrt{A^2 + B^2} \sin(\alpha + \phi)$.
- 67.** Consider the triangle having a , b , and d as sides. The angle formed by sides a and b is $\pi - \theta$ so from the law of cosines, $d^2 = a^2 + b^2 - 2ab \cos(\pi - \theta) = a^2 + b^2 + 2ab \cos \theta$, $d = \sqrt{a^2 + b^2 + 2ab \cos \theta}$.

APPENDIX F

Solving Polynomial Equations

EXERCISE SET F

1. (a) $q(x) = x^2 + 4x + 2, r(x) = -11x + 6$
 (b) $q(x) = 2x^2 + 4, r(x) = 9$
 (c) $q(x) = x^3 - x^2 + 2x - 2, r(x) = 2x + 1$

2. (a) $q(x) = 2x^2 - x + 2, r(x) = 5x + 5$
 (b) $q(x) = x^3 + 3x^2 - x + 2, r(x) = 3x - 1$
 (c) $q(x) = 5x^3 - 5, r(x) = 4x^2 + 10$

3. (a) $q(x) = 3x^2 + 6x + 8, r(x) = 15$
 (b) $q(x) = x^3 - 5x^2 + 20x - 100, r(x) = 504$
 (c) $q(x) = x^4 + x^3 + x^2 + x + 1, r(x) = 0$

4. (a) $q(x) = 2x^2 + x - 1, r(x) = 0$
 (b) $q(x) = 2x^3 - 5x^2 + 3x - 39, r(x) = 147$
 (c) $q(x) = x^6 + x^5 + x^4 + x^3 + x^2 + x + 1, r(x) = 2$

5.

x	0	1	-3	7
$p(x)$	-4	-3	101	5001

6.

x	1	-1	3	-3	7	-7	21	-21
$p(x)$	-24	-12	12	0	420	-168	10416	-7812

7. (a) $q(x) = x^2 + 6x + 13, r = 20$ (b) $q(x) = x^2 + 3x - 2, r = -4$

8. (a) $q(x) = x^4 - x^3 + x^2 - x + 1, r = -2$ (b) $q(x) = x^4 + x^3 + x^2 + x + 1, r = 0$

9. Assume $r = a/b$ a and b integers with $a > 0$:

- (a) b divides 1, $b = \pm 1$; a divides 24, $a = 1, 2, 3, 4, 6, 8, 12, 24$;
 the possible candidates are $\{\pm 1, \pm 2, \pm 3, \pm 4, \pm 6, \pm 8, \pm 12, \pm 24\}$
 (b) b divides 3 so $b = \pm 1, \pm 3$; a divides -10 so $a = 1, 2, 5, 10$;
 the possible candidates are $\{\pm 1, \pm 2, \pm 5, \pm 10, \pm 1/3, \pm 2/3, \pm 5/3, \pm 10/3\}$
 (c) b divides 1 so $b = \pm 1$; a divides 17 so $a = 1, 17$;
 the possible candidates are $\{\pm 1, \pm 17\}$

10. An integer zero c divides -21, so $c = \pm 1, \pm 3, \pm 7, \pm 21$ are the only possibilities; substitution of these candidates shows that the integer zeros are -7, -1, 3

11. $(x + 1)(x - 1)(x - 2)$

12. $(x + 2)(3x + 1)(x - 2)$

13. $(x + 3)^3(x + 1)$

14. $2x^4 + x^3 - 19x^2 + 9$

15. $(x + 3)(x + 2)(x + 1)^2(x - 3)$

17. -3 is the only real root.

18. $x = -3/2, 2 \pm \sqrt{3}$ are the real roots.

19. $x = -2, -2/3, -1 \pm \sqrt{3}$ are the real roots.

20. $-2, -1, 1/2, 3$
21. $-2, 2, 3$ are the only real roots.
23. If $x - 1$ is a factor then $p(1) = 0$, so $k^2 - 7k + 10 = 0$, $k^2 - 7k + 10 = (k - 2)(k - 5)$, so $k = 2, 5$.
24. $(-3)^7 = -2187$, so -3 is a root and thus by Theorem F.4, $x + 3$ is a factor of $x^7 + 2187$.
25. If the side of the cube is x then $x^2(x - 3) = 196$; the only real root of this equation is $x = 7$ cm.
26. (a) Try to solve $\frac{a}{b} > \left(\frac{a}{b}\right)^3 + 1$. The polynomial $p(x) = x^3 - x + 1$ has only one real root $c \approx -1.325$, and $p(0) = 1$ so $p(x) > 0$ for all $x > c$; hence there is no positive rational solution of $\frac{a}{b} > \left(\frac{a}{b}\right)^3 + 1$.
- (b) From part (a), any real $x < c$ is a solution.
27. Use the Factor Theorem with x as the variable and y as the constant c .
- (a) For any positive integer n the polynomial $x^n - y^n$ has $x = y$ as a root.
- (b) For any positive even integer n the polynomial $x^n - y^n$ has $x = -y$ as a root.
- (c) For any positive odd integer n the polynomial $x^n + y^n$ has $x = -y$ as a root.